



MOCK TEST

Boost your preparation for the CBSE Class 9 Mathematics exam with our meticulously designed Mock Test. This comprehensive resource is structured to replicate actual exam conditions, assess your understanding of foundational mathematical concepts, and enhance your problem-solving skills.

www.aepstudycircle.com

Prepare for CBSE Class 9 Mathematics success with confidence. Order our Mathematics Mock Test now to assess, refine, and maximize your performance in the upcoming examination. Approach the exam day with readiness and assurance, knowing you've thoroughly prepared for success in mathematics!




OFFLINE-ONLINE LEARNING ACADEMY

The Success Destination

+91-9939586130
+91-7739650505

2ND FLOOR, SATKOURI COMPLEX, THANA CHOWK,
RAMGARH - 829122-JH





Time Allowed: 3 hours

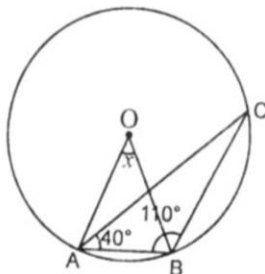
Maximum Marks: 80

General Instructions:

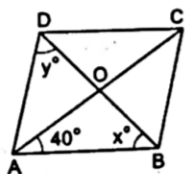
1. This Question Paper has 5 Sections A-E.
2. Section A has 20 MCQs carrying 1 mark each.
3. Section B has 5 questions carrying 02 marks each.
4. Section C has 6 questions carrying 03 marks each.
5. Section D has 4 questions carrying 05 marks each.
6. Section E has 3 case based integrated units of assessment (04 marks each) with subparts of the values of 1, 1 and 2 marks each respectively.
7. All Questions are compulsory. However, an internal choice in 2 Qs of 5 marks, 2 Qs of 3 marks and 2 Questions of 2 marks has been provided. An internal choice has been provided in the 2marks questions of Section E.
8. Draw neat figures wherever required. Take $\pi = 22/7$ wherever required if not stated.

Section A

1. The point (0, -4) lies [1]
 - a) on the negative direction of y-axis
 - b) in quadrant III
 - c) in quadrant IV
 - d) on the negative direction of x-axis
2. Each side of an equilateral triangle is $2x$ cm. If $x\sqrt{3} = \sqrt{48}$, then area of the triangle is : [1]
 - a) $\sqrt{48}$ cm²
 - b) $48\sqrt{3}$ cm²
 - c) $16\sqrt{3}$ cm²
 - d) 16 cm²
3. In the given figure, O is the centre of the circle. If $\angle CAB = 40^\circ$ and $\angle CBA = 110^\circ$, the value of x is : [1]



- a) 55°
 - b) 80°
 - c) 50°
 - d) 60°
4. In the given figure, ABCD is a Rhombus. Find the value of x and y ? [1]



a) $x = 55^\circ$ and $y = 65^\circ$

b) $x = 80^\circ$ and $y = 80^\circ$

c) $x = 75^\circ$ and $y = 55^\circ$

d) $x = 50^\circ$ and $y = 50^\circ$

5. If $4^x - 4^{x-1} = 24$, then $(2x)^x$ equals [1]

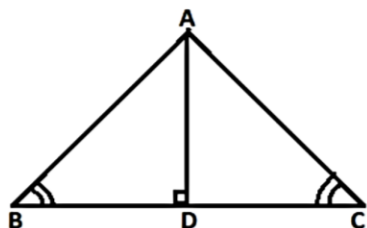
a) $\sqrt{5}$

b) $25\sqrt{5}$

c) 125

d) $5\sqrt{5}$

6. In the adjoining figure, $\angle B = \angle C$ and $AD \perp BC$. The rule by which $\triangle ABD \cong \triangle ADC$ [1]



a) SSS

b) SAS

c) RHS

d) AAS

7. How many lines pass through one point? [1]

a) one

b) three

c) two

d) many

8. The degree of the zero polynomial is [1]

a) 0

b) any natural number

c) 1

d) not defined

9. The simplest rationalisation factor of $(2\sqrt{2} - \sqrt{3})$ is [1]

a) $\sqrt{2} + \sqrt{3}$

b) $2\sqrt{2} + \sqrt{3}$

c) $2\sqrt{2} + 3$

d) $\sqrt{2} - \sqrt{3}$

10. The Diagonals AC and BD of a Parallelogram ABCD intersect each other at point O. If $\angle DAC = 32^\circ$ and $\angle AOB = 70^\circ$, then $\angle DBC$ is equal to [1]

a) 86°

b) 38°

c) 32°

d) 24°

11. If $x^{-2} = 64$, then $x^{\frac{1}{3}} + x^0 =$ [1]

a) $\frac{2}{3}$

b) 3

c) $\frac{3}{2}$

d) 2

12. The linear equation $2x - 5y = 7$ has [1]

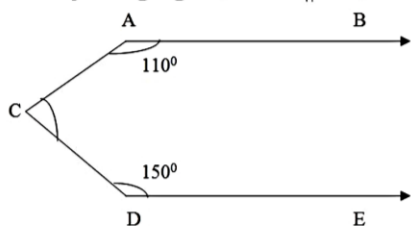
a) No solution

b) Infinitely many solutions

c) A unique solution

d) Two solutions

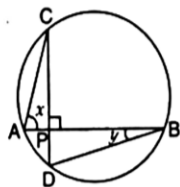
13. In the adjoining figure, if $AB \parallel DE$, then the measure of $\angle ACD$ is :- [1]



- a) 90° b) 100°
 c) 80° d) 70°
14. The value of $(32)^{\frac{1}{5}} + (-7)^0 + (64)^{\frac{1}{2}}$ is [1]

- a) 10 b) 0
 c) 11 d) 1

15. In the given figure, if chords AB and CD of the circle intersect each other at right angles, then, $x + y =$ [1]



- a) 75° b) 45°
 c) 90° d) 60°

16. Abscissa of all points on the x-axis is [1]

- a) -1 b) 0
 c) 1 d) any number

17. Express y in terms of x in the equation $5x - 2y = 7$. [1]

- a) $y = \frac{5x-7}{2}$ b) $y = \frac{7-5x}{2}$
 c) $y = \frac{7x+5}{2}$ d) $y = \frac{5x+7}{2}$

18. If $p(x) = 5x - 4x^2 + 3$ then $p(-1) = ?$ [1]

- a) -2 b) -6
 c) 2 d) 6

19. **Assertion (A):** ABCD is a square. AC and BD intersect at O. The measure of $\angle AOB = 90^\circ$. [1]

Reason (R): Diagonals of a square bisect each other at right angles.

- a) Both A and R are true and R is the correct explanation of A. b) Both A and R are true but R is not the correct explanation of A.
 c) A is true but R is false. d) A is false but R is true.

20. **Assertion (A):** $\sqrt{3}$ is an irrational number. [1]

Reason (R): Square root of a positive integer which is not a perfect square is an irrational number.

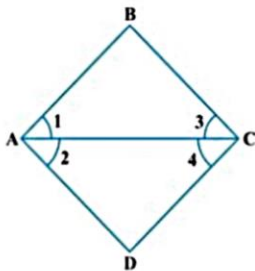
- a) Both A and R are true and R is the correct explanation of A. b) Both A and R are true but R is not the correct explanation of A.

c) A is true but R is false.

d) A is false but R is true.

Section B

21. In the given figure, we have $\angle 1 = \angle 3$ and $\angle 2 = \angle 4$. Show that $\angle A = \angle C$. [2]



22. Read the following two statements which are taken as axioms: [2]

- i. If two lines intersect each other, then the vertically opposite angles are not equal.
- ii. If a ray stands on a line, then the sum of two adjacent angles so formed is equal to 180° .

Is this system of axioms consistent? Justify your answer.

23. Which of the following points lie on the y-axis? [2]

A(1, 1), B(3, 0), C(0, 3), D(0, 0), E(-5, 0), F(0, -1), G(9, 0), H(0, -8).

24. Simplify: $(\sqrt{3} - \sqrt{2})^2$ [2]

OR

Find the value of a : $\frac{6}{3\sqrt{2}-2\sqrt{3}} = 3\sqrt{2} - a\sqrt{3}$

25. The height of a conical vessel is 3.5 cm. If its capacity is 3.3 litres of milk. Find the diameter of its base. [2]

OR

The radius and slant height of a cone are in the ratio 4 : 7. If its curved surface area is 792 cm^2 , find its radius. (Use $\pi = \frac{22}{7}$).

Section C

26. Simplify: $\frac{\sqrt{25}}{\sqrt[3]{64}} + \left(\frac{256}{625}\right)^{-1/4} + \frac{1}{\left(\frac{64}{125}\right)^{2/3}}$ [3]

27. Various modes of transport used by 1850 students of a school are given below: [3]

School bus	Private bus	Bicycle	Rickshaw	By foot
640	360	490	210	150

Draw a bar graph to represent the above data.

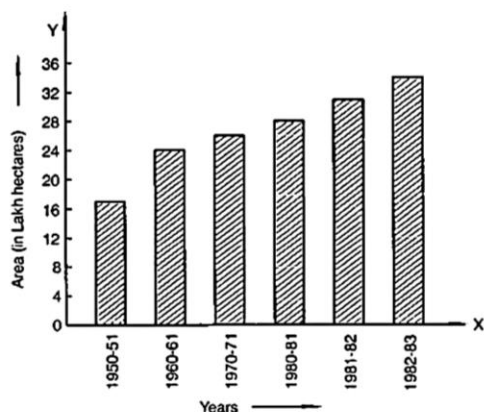
28. ABC is a triangle right angled at C. A line through the mid-point M of hypotenuse AB and parallel to BC intersects AC at D. Then prove that, [3]

- i. D is the midpoint AC
- ii. MD is perpendicular to AC
- iii. $CM = AM = \frac{1}{2} AB$

29. Find the solution of the linear equation $x + 2y = 8$ which represents a point on [3]

- i. The x-axis
- ii. The y-axis

30. Read the bar graph given in Figure and answer the following questions: [3]



- What information is given by the bar graph?
- In which years the areas under the sugarcane crop were the maximum and the minimum?
- State whether true or false:

The area under the sugarcane crop in the year 1982-83 is three times that of the year 1950-51.

OR

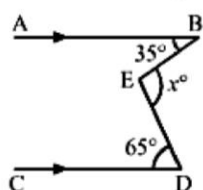
Construct a histogram for the following data:

Monthly School fee (in ₹):	30-60	60-90	90-120	120-150	150-180	180-210	210-240
No of Schools	5	12	14	18	10	9	4

31. If $x + 2a$ is a factor of $x^5 - 4a^2x^3 + 2x + 2a + 3$, find a . [3]

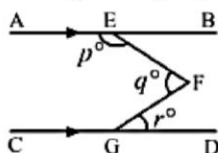
Section D

32. In each of the figures given below, $AB \parallel CD$. Find the value of x° in each case. [5]



OR

In the given figure, $AB \parallel CD$. Prove that $p + q - r = 180$.



33. A cloth having an area of 165 m^2 is shaped into the form of a conical tent of radius 5 m. [5]
- How many students can sit in the tent if a student on an average, occupies $\frac{5}{7} \text{ m}^2$ on the ground?
 - Find the volume of the cone.
34. The perimeter of a triangular field is 420 m and its sides are in the ratio 6 : 7 : 8. Find the area of the triangular field. [5]

OR

The sides of a triangle are in the ratio 5 : 12 : 13 and its perimeter is 150 m. Find the area of the triangle.

35. Using factor theorem, factorize the polynomial: $2x^4 - 7x^3 - 13x^2 + 63x - 45$ [5]

Section E

36. **Read the text carefully and answer the questions:**

[4]

Peter, Kevin James, Reeta and Veena were students of Class 9th B at Govt Sr Sec School, Sector 5, Gurgaon. Once the teacher told **Peter to think a number x and to Kevin to think another number y** so that the difference of the numbers is 10 ($x > y$).

Now the teacher asked James to add double of Peter's number and that three times of Kevin's number, the total was found 120.

Reeta just entered in the class, she did not know any number.

The teacher said Reeta to form the 1st equation with two variables x and y .

Now Veena just entered the class so the teacher told her to form 2nd equation with two variables x and y .

Now teacher Told Reeta to find the values of x and y . Peter and kelvin were told to verify the numbers x and y .



- (i) What are the equation formed by Reeta and Veena?
- (ii) What was the equation formed by Veena?
- (iii) Which number did Peter think?

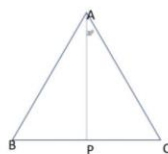

OR

Which number did Kelvin think?

37. **Read the text carefully and answer the questions:**

[4]

In a forest, a big tree got broken due to heavy rain and wind. Due to this rain the big branches AB and AC with lengths 5m fell down on the ground. Branch AC makes an angle of 30° with the main tree AP. The distance of Point B from P is 4 m. You can observe that $\triangle ABP$ is congruent to $\triangle ACP$.



- (i) Show that $\triangle ACP$ and $\triangle ABP$ are congruent.
- (ii) Find the value of $\angle ACP$?
- (iii) Find the value of $\angle BAP$?

OR

What is the total height of the tree?

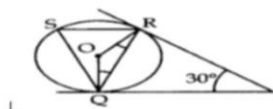
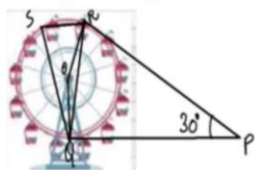
38. **Read the text carefully and answer the questions:**

[4]

A Ferris wheel (or a big wheel in the United Kingdom) is an amusement ride consisting of a rotating upright wheel with multiple passenger-carrying components (commonly referred to as passenger cars, cabins, tubs, capsules, gondolas, or pods) attached to the rim in such a way that as the wheel turns, they are kept upright, usually by gravity.

After taking a ride in Ferris wheel, Aarti came out from the crowd and was observing her friends who were enjoying the ride . She was curious about the different angles and measures that the wheel will form. She forms


the figure as given below



- (i) Find $\angle ROQ$.
- (ii) Find $\angle RQP$.
- (iii) Find $\angle RSQ$.

OR

Find $\angle ORP$.



Section A

1. (a) on the negative direction of y-axis

Explanation: Since $x = 0$ so point lies on y-axis, but value of y is -ve.
 So, point lies on -ve direction of y-axis.

- 2.

(c) $16\sqrt{3} \text{ cm}^2$

Explanation: Here, $x\sqrt{3} = \sqrt{48}$

$\Rightarrow x = \sqrt{16}$

Side = $2x$

Area of equilateral triangle = $\frac{\sqrt{3}}{4}(\text{Side})^2$

= $\frac{\sqrt{3}}{4}(2x)^2$

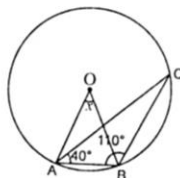
= $\sqrt{3}x^2 \text{ sq. cm}$

= $\sqrt{3}(\sqrt{16})^2 = 16\sqrt{3}$

- 3.

(d) 60°

Explanation:



In $\triangle ABC$

$\angle A + \angle B + \angle C = 180^\circ$

$\Rightarrow \angle C = 180^\circ - 40^\circ - 110 = 30^\circ$

Since AB is a chord and angle made by a chord at the centre is twice the angle made by it on any point on the circumference, therefore:-

$x = 2 \times 30^\circ = 60^\circ$

- 4.

(d) $x = 50^\circ$ and $y = 50^\circ$

Explanation: ABCD is a rhombus and a rhombus is also a parallelogram. A rhombus has four equal sides.

The diagonals of a rhombus are perpendicular bisector of each other.

So, in $\triangle AOB$, $\angle OAB = 40^\circ$, $\angle AOB = 90^\circ$ and $\angle ABO = 180^\circ - (40^\circ + 90^\circ) = 50^\circ$

$\therefore x = 50^\circ$

In $\triangle ABD$, $AB = AD$

So, $\angle ABD = \angle ADB = 50^\circ$

Hence, $x = 50^\circ$ and $y = 50^\circ$

- 5.

(b) $25\sqrt{5}$

Explanation: $4^x - 4^{x-1} = 24$

$\Rightarrow 4^x - \frac{4^x}{4^1} = 24$

$\Rightarrow 4^x \left(1 - \frac{1}{4}\right) = 24$

$\Rightarrow 4^x \left(\frac{3}{4}\right) = 24$

$\Rightarrow 4^x = \frac{24 \times 4}{3}$

$\Rightarrow 4^x = 32$

$\Rightarrow (2^2)^x = (2)^5$

$$\Rightarrow 2^{2x} = 2^5$$

Comparing, we get

$$2x = 5 \Rightarrow x = \frac{5}{2}$$

$$\therefore (2x)^x \left(2 \times \frac{5}{2}\right)^{\frac{5}{2}} = (5)^{\frac{5}{2}}$$

$$= \sqrt{5^5} = \sqrt{5 \times 5 \times 5 \times 5 \times 5}$$

$$= 5 \times 5\sqrt{5} = 25\sqrt{5}$$

6.

(d) AAS

Explanation: In $\triangle ABD$ and $\triangle ADC$, we have

$$\angle ABD = \angle ACD \text{ (given)}$$

$$\angle BDA = \angle CDA \text{ (90}^\circ\text{)}$$

$$AD = AD \text{ (common in both)}$$

Hence, $\triangle ABD \cong \triangle ADC$, by AAS criterion

7.

(d) many

Explanation: Because one point can be solution of many equations. So many equations can be pass from one point.

8.

(d) not defined

Explanation: The general form of a polynomial is $a_n x^n$, where n is a natural number.

For zero polynomial $a_n = 0$.

Since the largest value of n for which a_n is non-zero is negative infinity (all the integers are bigger than negative infinity).

Therefore, the degree of zero polynomials is not defined.

9.

(b) $2\sqrt{2} + \sqrt{3}$

Explanation: $2\sqrt{2} + \sqrt{3}$

10.

(b) 38°

Explanation: $\angle DAC = \angle ACB = 32^\circ$ (alternate angles)

$$\angle AOB + \angle COB = 180^\circ \text{ (linear pair)}$$

$$\angle COB = 180 - 70^\circ = 110^\circ$$

In triangle BOC,

$$\angle BOC + \angle OCB + \angle CBO = 180^\circ \text{ (angle sum property)}$$

$$110^\circ + 32^\circ + \angle CBO = 180^\circ$$

$$\angle CBO = 180^\circ - 142^\circ = 38^\circ$$

11.

(c) $\frac{3}{2}$

Explanation: $x^{-2} = 64$

$$\Rightarrow x^{-2} = 8^2$$

$$\Rightarrow \left(\frac{1}{x}\right)^2 = (8)^2$$

$$\therefore \frac{1}{x} = 8 \Rightarrow x = \frac{1}{8}$$

$$x^{\frac{1}{3}} + x^0 = \left(\frac{1}{8}\right)^{\frac{1}{3}} + 1$$

$$= \left[\left(\frac{1}{2}\right)^3\right]^{\frac{1}{3}} + 1 = \left(\frac{1}{2}\right)^{3 \times \frac{1}{3}} + 1$$

$$= \frac{1}{2} + 1 = \frac{3}{2}$$

12.

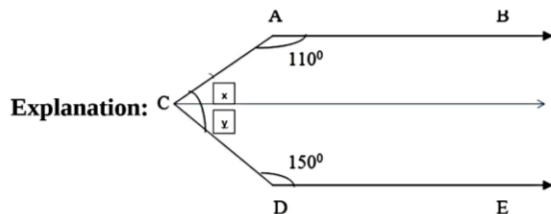
(b) Infinitely many solutions

Explanation: Given equation is $2x - 5y = 7$

There is no given value of x and y so we can take any values.
 For every value of x , we get a corresponding value of y and vice-versa.
 Therefore, it has infinitely many solutions.

13.

(b) 100°



$$x + 110^{\circ} = 180^{\circ} \text{ (Supplementary angles)}$$

$$x = 70^{\circ}$$

$$y + 150^{\circ} = 180^{\circ} \text{ (Supplementary angles)}$$

$$y = 30^{\circ}$$

$$\angle ACD = 70^{\circ} + 30^{\circ} = 100^{\circ}$$

14.

(c) 11

Explanation: $(32)^{\frac{1}{5}} + (-7)^0 + (64)^{\frac{1}{2}}$

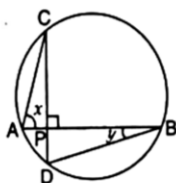
$$= 2 + 1 + 8$$

$$= 11$$

15.

(c) 90°

Explanation:



$$y = \angle ACP \text{ (Angles of same arc)}$$

$$\angle APC = 180^{\circ} - 90^{\circ} = 90^{\circ} \text{ } (\angle APC, \angle CPB \text{ are linear pair})$$

Thus from triangle APC,

$$x + y + \angle APC = 180^{\circ}$$

$$\text{Hence, } x + y = 90^{\circ}$$

16.

(d) any number

Explanation: Abscissa of point in x axis is can be any number but ordinate will always be zero, because for any point to lie on x-axis its y-ordinate must be equal to zero.

17.

(a) $y = \frac{5x-7}{2}$

Explanation: $5x - 2y = 7$

$$-2y = 7 - 5x$$

$$2y = 5x - 7$$

$$y = \frac{5x-7}{2}$$

18.

(b) -6

Explanation: $p(x) = 5x - 4x^2 + 3$

Putting $x = -1$ in $p(x)$, we get

$$p(-1) = 5 \times (-1) - 4 \times (-1)^2 + 3 = -5 - 4 + 3 = -6$$

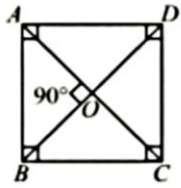
19.

(a) Both A and R are true and R is the correct explanation of A.

Explanation:

Since, diagonals of a square bisect each other at right angles.

$$\angle AOB = 90^\circ$$



20. (a) Both A and R are true and R is the correct explanation of A.

Explanation: Both A and R are true and R is the correct explanation of A.

Section B

21. We have $\angle 1 = \angle 3 \dots(1)$ [Given]

And $\angle 2 = \angle 4 \dots(2)$ [Given]

Now, by Euclid's axiom 2, we have if equal are added to equals, the whole are equal.

Adding (1) and (2), we get

$$\angle 1 + \angle 2 = \angle 3 + \angle 4$$

Hence, $\angle A = \angle C$.

22. It is known that, if two lines intersect each other, then the vertically opposite angles are equal. It is a theorem, therefore, given Statement I is false and not an axiom.

Also, we know that, if a ray stands on a line, then the sum of two adjacent angles so formed is equal to 180° . It is an axiom.

Therefore, given statement parallel is true and an axiom.

Thus, in given statements, first is false and second is an axiom. Therefore, given system of axioms is not consistent.

23. A point lies on y-axis if x-coordinate is zero. Hence C, D, F and H points lie on y-axis.

$$\begin{aligned} 24. (\sqrt{3} - \sqrt{2})^2 &= (\sqrt{3})^2 + (\sqrt{2})^2 - 2(\sqrt{3})(\sqrt{2}) \\ &= 3 + 2 - 2\sqrt{3} \times \sqrt{2} = 5 - 2\sqrt{6} \end{aligned}$$

OR

$$\begin{aligned} &3\sqrt{2} - a\sqrt{3} \\ &= \frac{6}{3\sqrt{2}-2\sqrt{3}} \\ &= \frac{6}{3\sqrt{2}-2\sqrt{3}} \times \frac{3\sqrt{2}+2\sqrt{3}}{3\sqrt{2}+2\sqrt{3}} \\ &= \frac{6(3\sqrt{2}+2\sqrt{3})}{(3\sqrt{2})^2 - (2\sqrt{3})^2} \\ &= \frac{6(3\sqrt{2}+2\sqrt{3})}{18-12} \\ &= \frac{6(3\sqrt{2}+2\sqrt{3})}{6} \\ &= 3\sqrt{2} + 2\sqrt{3} \end{aligned}$$

On comparing,

$$3\sqrt{2} - a\sqrt{3} = 3\sqrt{2} + 2\sqrt{3}$$

$$\Rightarrow a = -2$$

25. We are given that,

Height of a conical vessel = 3.5 cm and

Capacity of conical vessel is 3.3 litres or 3300 cm^3

Now,

We know, Volume of cone = $\frac{1}{3}\pi r^2 h$

$$3300 = \frac{1}{3} \times \frac{22}{7} \times r^2 \times 3.5$$

$$\text{or } r^2 = 900$$

$$\text{or } r = 30$$

So, radius of cone is 30 cm

Hence, diameter of its base = 2 radius

$$= 2 \times 30$$

$$= 60 \text{ cm}$$

OR

Let the radius of cone (r) = $4x \text{ cm}$ and the slant height of the cone (l) = $7x \text{ cm}$

Curved surface area of cone = $\pi r l$

$$\therefore \pi r l = 792 \text{ cm}^2$$

$$\Rightarrow \frac{22}{7} \times 4x \times 7x = 792$$

$$\Rightarrow x^2 = \frac{792}{22 \times 4} = 9$$

$$\Rightarrow x = 3 \text{ cm}$$

$$\therefore \text{Radius of the cone} = 4 \times 3 = 12 \text{ cm}$$

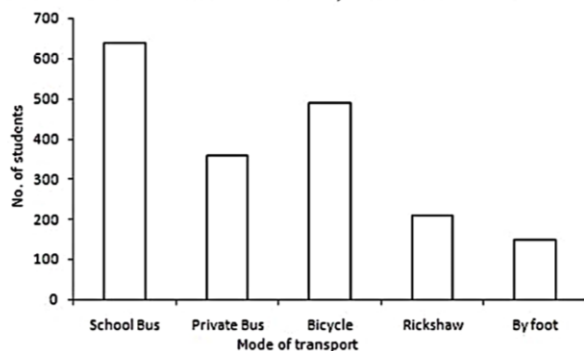
Section C

$$\begin{aligned} 26. \text{ Given, } & \sqrt[3]{\frac{25}{64}} + \left(\frac{256}{625}\right)^{-1/4} + \frac{1}{\left(\frac{64}{125}\right)^{2/3}} \\ &= \frac{\sqrt{5 \times 5}}{\sqrt[3]{4 \times 4 \times 4}} + \left(\frac{625}{256}\right)^{1/4} + \left(\frac{125}{64}\right)^{2/3} \\ &= \frac{5}{4} + \left(\frac{5^4}{4^4}\right)^{1/4} + \left(\frac{5^3}{4^3}\right)^{2/3} \\ &= \frac{5}{4} + \left(\frac{5}{4}\right)^{4 \times \frac{1}{4}} + \left(\frac{5}{4}\right)^{3 \times \frac{2}{3}} \\ &= \frac{5}{4} + \frac{5}{4} + \left(\frac{5}{4}\right)^2 = \frac{5}{4} + \frac{5}{4} + \frac{25}{16} \\ &= \frac{20+20+25}{16} = \frac{65}{16} \end{aligned}$$

27. Take the mode of transport along the x-axis and the number of students along the y-axis.

Along the y-axis, take 1 big division = 100 units.

Now we shall draw the bar chart, as shown below:

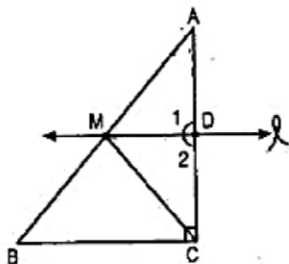


28. i. In $\triangle ABC$, M is the mid-point of AB [Given]

$MD \parallel BC$

$\therefore AD = DC$ [Converse of mid-point theorem]

Thus D is the mid-point of AC.



ii. $l \parallel BC$ (given) consider AC as a transversal.

$\therefore \angle 1 = \angle C$ [Corresponding angles]

$\Rightarrow \angle 1 = 90^\circ$ [$\angle C = 90^\circ$]

Thus $MD \perp AC$.

iii. In $\triangle AMD$ and $\triangle CMD$,

$AD = DC$ [proved above]

$\angle 1 = \angle 2 = 90^\circ$ [proved above]

$MD = MD$ [common]

$\therefore \triangle AMD \cong \triangle CMD$ [By SAS congruency]

$\Rightarrow AM = CM$ [By C.P.C.T.].....(i)

Given that M is the mid-point of AB.

$\therefore AM = \frac{1}{2} AB$(ii)

From eq. (i) and (ii),

$$CM = AM = \frac{1}{2} AB$$

29. i. On x-axis $y = 0$

$$\Rightarrow x + 2 \times 0 = 8 \Rightarrow x = 8$$

Therefore, the required point is (8, 0).

ii. On y-axis $x = 0$

$$\Rightarrow 0 + 2y = 8$$

$$\Rightarrow y = \frac{8}{2} \Rightarrow y = 4$$

Thus, the required point is (0, 4).

30. i. It gives the information about the areas (in lakh hectares) under sugarcane crop during different years in India.

ii. The areas under the sugarcane crops were the maximum and minimum in 1982-83 and 1950-51 respectively.

iii. The area under sugarcane crop in the year 1982-83 = 34 lakh hectares.

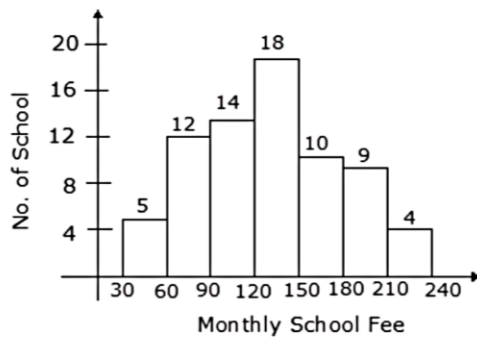
The area under sugarcane crop in the year 1950-51 = 17 lakh hectares.

Clearly, the area under sugarcane crop in the year 1982-83 is not 3 times that of the year 1950-51

So, the given statement is false.

OR

REQUIRED GRAPH



31. Let $p(x) = x^5 - 4a^2x^3 + 2x + 2a + 3$

If $x - (-2a)$ is a factor of $p(x)$, then $p(-2a) = 0$

$$\therefore p(-2a) = (-2a)^5 - 4a^2(-2a)^3 + 2(-2a) + 2a + 3$$

$$= -32a^5 + 32a^5 - 4a + 2a + 3$$

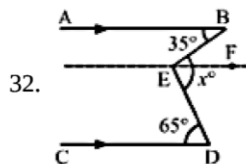
$$= -2a + 3$$

$$\text{Now, } p(-2a) = 0$$

$$\Rightarrow -2a + 3 = 0$$

$$\Rightarrow a = \frac{3}{2}$$

Section D



Draw $EF \parallel AB \parallel CD$

Now, $AB \parallel EF$ and BE is the transversal.

Then,

$$\angle ABE = \angle BEF \text{ [Alternate Interior Angles]}$$

$$\Rightarrow \angle BEF = 35^\circ$$

Again, $EF \parallel CD$ and DE is the transversal

Then,

$$\angle DEF = \angle FED$$

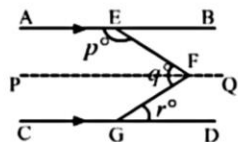
$$\Rightarrow \angle FED = 65^\circ$$

$$\therefore x^\circ = \angle BEF + \angle FED$$

$$x^\circ = 35^\circ + 65^\circ$$

$$x^\circ = 100^\circ$$

OR



Draw $PFQ \parallel AB \parallel CD$

Now, $PFQ \parallel AB$ and EF is the transversal.

Then,

$$\angle AEF + \angle EFP = 180^\circ \dots(i)$$

[Angles on the same side of a transversal line are supplementary]

Also, $PFQ \parallel CD$.

$$\angle PFG = \angle FGD = r^\circ \text{ [Alternate Angles]}$$

$$\text{and } \angle EFP = \angle EFG - \angle PFG = q^\circ - r^\circ$$

putting the value of $\angle EFP$ in equation (i)

we get,

$$p^\circ + q^\circ - r^\circ = 180^\circ \text{ [}\angle AEF = p^\circ\text{]}$$

33. Suppose l be the slant height of the conical tent.

Radius of the base of conical tent (r) = $5m$

i. Area of the circular base of the cone = $\pi r^2 = \frac{22}{7} \times 5^2 m^2$

$$\text{Number of student} = \frac{\text{Area of the base}}{\text{Area occupied by one student}}$$

$$= \frac{\frac{22}{7} \times 5 \times 5 m^2}{\frac{5}{7} m^2} = \frac{22}{7} \times 5 \times 5 \times \frac{7}{5} = 110$$

ii. Also, curved surface area of cone = $\pi r l$

$$\Rightarrow 165 = \frac{22}{7} \times 5 \times l$$

$$\Rightarrow l = \frac{165 \times 7}{22 \times 5}$$

$$\Rightarrow l = \frac{21}{2} m = 10.5m$$

$$\text{Also, } h^2 = l^2 - r^2$$

$$\Rightarrow h = \sqrt{(10.5)^2 - 5^2} = \sqrt{15.5 \times 5.5} \approx 9.23$$

$$\text{Volume of conical tent} = \frac{1}{3} \pi r^2 h$$

$$= \frac{1}{3} \times \frac{22}{7} \times 5^2 \times 9.23 m^3 = 241.74 m^3.$$

34. Suppose that the sides in metres are $6x$, $7x$ and $8x$.

Now, $6x + 7x + 8x = \text{perimeter} = 420$

$$\Rightarrow 21x = 420$$

$$\Rightarrow x = \frac{420}{21}$$

$$\Rightarrow x = 20$$

\therefore The sides of the triangular field are $6 \times 20m$, $7 \times 20m$, $8 \times 20m$, i.e., $120m$, $140m$ and $160m$.

Now, $s = \text{Half the perimeter of triangular field.}$

$$= \frac{1}{2} \times 420m = 210m$$

Using Heron's formula,

$$\text{Area of triangular field} = \sqrt{s(s-a)(s-b)(s-c)}$$

$$= \sqrt{210(210-120)(210-140)(210-160)}$$

$$= \sqrt{210 \times 90 \times 70 \times 50}$$

$$= \sqrt{66150000} = 8133.265 m^2$$

Hence, the area of the triangular field = $8133.265 m^2$.

OR

Given that the sides of a triangle are in the ratio $5:12:13$ and its perimeter is $150m$

Let the sides of the triangle be $5x$ m, $12x$ m and $13x$ m.

We know:

Perimeter = Sum of all sides

$$\text{or, } 150 = 5x + 12x + 13x$$

$$\text{or, } 30x = 150$$

or, $x = 5$

Thus, we obtain the sides of the triangle.

$$5 \times 5 = 25 \text{ m}$$

$$12 \times 5 = 60 \text{ m}$$

$$13 \times 5 = 65 \text{ m}$$

Now,

Let:

$$a = 25 \text{ m, } b = 60 \text{ m and } c = 65 \text{ m}$$

$$\therefore s = \frac{150}{2} = 75 \text{ m}$$

$$\Rightarrow s = 75 \text{ m}$$

By Heron's formula, we have

$$\begin{aligned} \text{Area of triangle} &= \sqrt{s(s-a)(s-b)(s-c)} \\ &= \sqrt{75(75-25)(75-60)(75-65)} \\ &= \sqrt{75 \times 50 \times 15 \times 10} \\ &= \sqrt{15 \times 5 \times 5 \times 10 \times 15 \times 10} \\ &= 15 \times 5 \times 10 \\ &= 750 \text{ m}^2 \end{aligned}$$

35. Given, $f(x) = 2x^4 - 7x^3 - 13x^2 + 63x - 45$

The factors of constant term - 45 are $\pm 1, \pm 3, \pm 5, \pm 9, \pm 15, \pm 45$

The factors of the coefficient of x^4 is 2. Hence possible rational roots of $f(x)$ are $\pm 1, \pm 3, \pm 5, \pm 9, \pm 15, \pm 45, \pm 1/2, \pm 3/2, \pm 5/2, \pm 9/2, \pm 15/2, \pm 45/2$

Let, $x - 1 = 0$

$$\Rightarrow x = 1$$

$$\begin{aligned} f(1) &= 2(1)^4 - 7(1)^3 - 13(1)^2 + 63(1) - 45 \\ &= 2 - 7 - 13 + 63 - 45 \\ &= 0 \end{aligned}$$

Let, $x - 3 = 0$

$$\Rightarrow x = 3$$

$$\begin{aligned} f(3) &= 2(3)^4 - 7(3)^3 - 13(3)^2 + 63(3) - 45 \\ &= 162 - 189 - 117 + 189 - 45 \\ &= 0 \end{aligned}$$

Let $x+3=0$

$$\Rightarrow x = -3$$

$$\begin{aligned} f(-3) &= 2(-3)^4 - 7(-3)^3 - 13(-3)^2 + 63(-3) - 45 \\ &= 162 + 189 - 117 - 189 - 45 = 0 \end{aligned}$$

Let $2x-5=0$

$$\Rightarrow x = \frac{5}{2}$$

$$\begin{aligned} f\left(\frac{5}{2}\right) &= 2\left(\frac{5}{2}\right)^4 - 7\left(\frac{5}{2}\right)^3 - 13\left(\frac{5}{2}\right)^2 + 63\left(\frac{5}{2}\right) - 45 \\ &= \frac{625 - 875 - 650 + 1260 - 360}{2^3} \\ &= \frac{1885 - 1885}{2^3} = 0 \end{aligned}$$

Therefore, $(x-1), (x-3), (x+3)$ and $(2x-5)$ are factors of $f(x)$.

Since $f(x)$ is a polynomial of degree 4, therefore it cannot have more than more factors.

Therefore, $2x^4 - 7x^3 - 13x^2 + 63x - 45 = (x - 1)(x - 3)(x + 3)(2x - 5)$

Section E

36. Read the text carefully and answer the questions:

Peter, Kevin James, Reeta and Veena were students of Class 9th B at Govt Sr Sec School, Sector 5, Gurgaon.

Once the teacher told **Peter to think a number x and to Kevin to think another number y** so that the difference of the numbers is 10 ($x > y$).

Now the teacher asked James to add double of Peter's number and that three times of Kevin's number, the total was found 120.

Reeta just entered in the class, she did not know any number.

The teacher said Reeta to form the 1st equation with two variables x and y .

Now Veena just entered the class so the teacher told her to form 2nd equation with two variables x and y.
 Now teacher Told Reeta to find the values of x and y. Peter and kelvin were told to verify the numbers x and y.



(i) $x - y = 10$

$2x + 3y = 120$

(ii) $2x + 3y = 120$

(iii) $x - y = 10 \dots(1)$

$2x + 3y = 120 \dots(2)$

Multiply equation (1) by 3 and to equation (2)

$3x - 3y + 2x + 3y = 30 + 120$

$\Rightarrow 5x = 150$

$\Rightarrow x = 30$

Hence the number thought by Prateek is 30.

OR

We know that $x - y = 10 \dots(i)$ and $2x + 3y = 120 \dots(ii)$

Put $x = 30$ in equation (i)

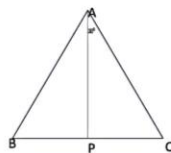

$30 - y = 10$

$\Rightarrow y = 40$

Hence number thought by Kevin = 40

37. Read the text carefully and answer the questions:

In a forest, a big tree got broken due to heavy rain and wind. Due to this rain the big branches AB and AC with lengths 5m fell down on the ground. Branch AC makes an angle of 30° with the main tree AP. The distance of Point B from P is 4 m. You can observe that $\triangle ABP$ is congruent to $\triangle ACP$.



(i) In $\triangle ACP$ and $\triangle ABP$

$AB = AC$ (Given)

$AP = AP$ (common)

$\angle APB = \angle APC = 90^\circ$

By RHS criteria $\triangle ACP \cong \triangle ABP$

(ii) In $\triangle ACP$

$\angle APC + \angle PAC + \angle ACP = 180^\circ$

$\Rightarrow 90^\circ + 30^\circ + \angle ACP = 180^\circ$ (angle sum property of \triangle)

$\Rightarrow \angle ACP = 180^\circ - 120^\circ = 60^\circ$

$\angle ACP = 60^\circ$

(iii) $\triangle ACP \cong \triangle ABP$

Corresponding part of congruent triangle

$\angle BAP = \angle CAP$

$\angle BAP = 30^\circ$ (given $\angle CAP = 30^\circ$)

OR

$\triangle ACP$

$$AC^2 = AP^2 + PC^2$$

$$\Rightarrow 25 = AP^2 + 16$$

$$\Rightarrow AP^2 = 25 - 16 = 9$$

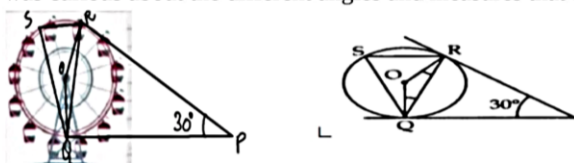
$$\Rightarrow AP = 3$$

$$\text{Total height of the tree} = AP + 5 = 3 + 5 = 8 \text{ m}$$

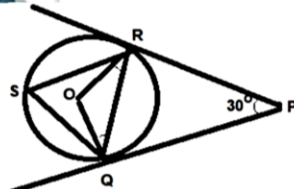
38. Read the text carefully and answer the questions:

A Ferris wheel (or a big wheel in the United Kingdom) is an amusement ride consisting of a rotating upright wheel with multiple passenger-carrying components (commonly referred to as passenger cars, cabins, tubs, capsules, gondolas, or pods) attached to the rim in such a way that as the wheel turns, they are kept upright, usually by gravity.

After taking a ride in Ferris wheel, Aarti came out from the crowd and was observing her friends who were enjoying the ride. She was curious about the different angles and measures that the wheel will form. She forms the figure as given below



(i)

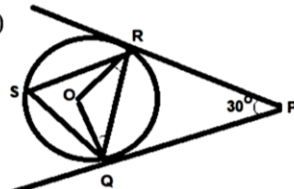


$$\angle ROQ + \angle RPQ = 180^\circ$$

$$\angle ROQ + 30^\circ = 180^\circ$$

$$\angle ROQ = 150^\circ$$

(ii)

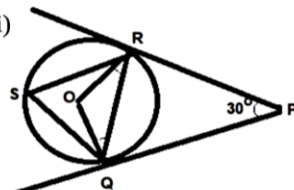


$$\angle RQP = \angle OQP - \angle OQR$$

$$= 90^\circ - 15^\circ$$

$$= 75^\circ$$

(iii)

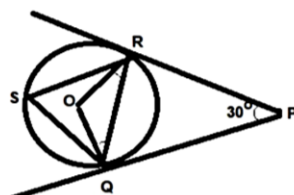


$$\angle RSQ = \frac{1}{2} \angle ROQ$$

$$= \frac{1}{2} \times 150^\circ$$

$$\angle RSQ = 75^\circ$$

OR



$$\angle ORP = 90^\circ$$

\therefore radius and tangent are \perp at point of contact