

ONLINE-OFFLINE LEARNING ACADEMY

YOUR GATEWAY TO EXCELLENCE IN
IIT-JEE, NEET AND CBSE EXAMS



ELECTROSTATICS

2

CONCEPT BASED
PROBLEMS

IIT-JEE

NEET

CBSE



IIT-JEE
NEET

2

CONTACT US:

+91-9939586130
+91-9955930311



www.aepstudycircle.com



aepstudycircle@gmail.com



2ND FLOOR, SATKOURI COMPLEX, THANA CHOWK, RAMGARH - 829122-JH

BASIC IDEAS

Section - 1


Capacitor is an arrangement of two conductors carrying charges of equal magnitudes and opposite sign and separated by an insulating medium. The following points may be carefully noted.

1. The net charge on the capacitor as a whole is zero. When we say that a capacitor has a charge Q , we mean that the positively charged conductor has a charge $+Q$ and negatively charged conductor has a charge $-Q$.
2. The positively charged conductor is at a higher potential than the negatively charged conductor. The potential difference V between the conductors is proportional to the charge magnitude Q and the ratio Q/V is known as *capacitance* C of the capacitor.

$$C = \frac{Q}{V}$$

Unit of capacitance is **farad** (F). The capacitance is usually measured in microfarad (μF).

$$1 \mu F = 10^{-6} F$$

3. In a circuit, a capacitor is represented by the symbol : 
4. Capacitors work as a charge-storing or energy-storing devices. A capacitor can be thought of as a device which stores energy in the form of electric field. Energy stored in a capacitor is denoted by U . If V is the potential difference across the capacitor and Q is the charge on the capacitor and C is the capacitance of capacitor, then :

$$U = \frac{1}{2} CV^2 \quad \text{or} \quad U = \frac{1}{2} \frac{Q^2}{C} \quad \text{or} \quad U = \frac{1}{2} QV$$

Parallel Plate Capacitor :

The parallel plate capacitor consists of two metal plates placed parallel to each other and separated by a distance that is very small as compared to the dimension of the plates. The electric field between the plates is given by :

$$E = \frac{\sigma}{k\epsilon_0}$$

where σ : surface charge density on either plate

k : dielectric constant of the medium between plates

If d is the separation between plates and A is the area of each plate, the potential difference (V) between plates is given as :



$$V = E d$$

$$V = \frac{\sigma}{k\epsilon_0} d = \frac{Q}{k\epsilon_0 A} d$$

$$C = \frac{k\epsilon_0 A}{d} \text{ for parallel plate capacitor.}$$

Note: If there is vacuum between the plates, $k = 1$.

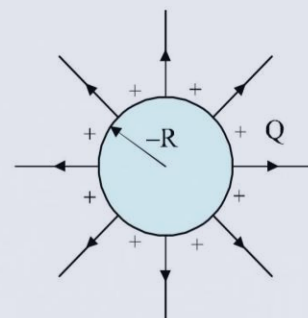
Isolated Sphere as a Capacitor :

A conducting sphere of radius R carrying a charge Q can be treated as a capacitor with high-potential conductor as the sphere itself and the low-potential conductor as a sphere of infinite radius. The potential difference between these two spheres is :

$$V = \frac{Q}{4\pi\epsilon_0 R} - 0$$

$$\text{Capacitance } (C) = \frac{Q}{V}$$

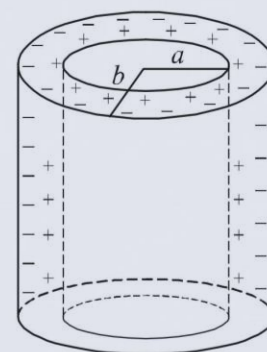
$$C = 4\pi\epsilon_0 R$$



Cylindrical Capacitor :

Cylindrical capacitor consists of two co-axial cylinders of radii a and b and length ℓ . The electric field exists in the region between the cylinders. Let k be the dielectric constant of the material between the cylinders. The capacitance is given by :

$$C = \frac{2\pi k\epsilon_0 \ell}{\log \frac{b}{a}}$$



Spherical Capacitor :

A spherical capacitor consists of two concentric spheres of radii a and b as shown. The inner sphere is positively charged to potential V and outer sphere is at zero potential. The inner surface of the outer sphere has an equal negative charge.

The potential difference between the spheres is :

$$V - 0 = \frac{Q}{4\pi\epsilon_0 a} - \frac{Q}{4\pi\epsilon_0 b} = \frac{Q}{4\pi\epsilon_0} \left(\frac{1}{a} - \frac{1}{b} \right)$$

$$C = \frac{4\pi\epsilon_0 ab}{b-a}$$

For a dielectric (k) between the spheres :

$$C = \frac{4\pi k \epsilon_0 ab}{b-a}$$

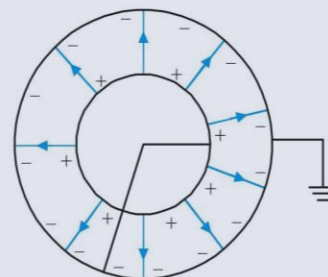


Illustration - 1 The plates of a parallel plate capacitor are 5 mm apart and 2 m^2 in area. The plates are in vacuum. A potential difference of 10,000 V is applied across the capacitor. Calculate :

- | | |
|--|---|
| (a) the capacitance, | (b) the charge on each plate, |
| (c) the electric field in space between the plates | (d) the energy stored in the capacitor. |

SOLUTION :

$$(a) \quad C = \frac{\epsilon_0 A}{d} = \frac{8.85 \times 10^{-12} \times 2}{5 \times 10^{-3}}$$

$$C = 0.00354 \mu\text{F}.$$

$$(b) \quad Q = CV = (0.00354 \times 10^{-6}) \times (10000)$$

$$Q = 3.54 \times 10^{-5} \text{ C} = 35.4 \mu\text{C}$$

The plate at higher potential has a positive charge of magnitude $35.4 \mu\text{C}$ and the plate at lower potential has a negative charge of $-35.4 \mu\text{C}$.

$$(c) \quad E = \frac{V}{d} = \frac{10000}{5 \times 10^{-3}} \text{ V/m} = 20 \times 10^5 \text{ N/C}$$

or alternatively

$$E = \frac{\sigma}{\epsilon_0} = \frac{Q}{\epsilon_0 A} = \frac{3.54 \times 10^{-5}}{8.85 \times 10^{-12} \times 2}$$

$$= 20 \times 10^5 \text{ N/C}$$

$$(d) \quad U = \frac{1}{2} CV^2$$

$$U = \frac{1}{2} \times (3.54 \times 10^{-5}) (10000)^2 = 0.177 \text{ J}.$$

Illustration - 2 A parallel plate air capacitor is made using two plates 0.2 m square, spaced 1 cm apart. It is connected to a 50 V battery.

- What is the capacitance ?
- What is the charge on each plate ?
- What is the energy stored in the capacitor ?
- What is the electric field between the plates ?
- If the battery is disconnected and then the plates are pulled apart to a separation of 2 cm , what are the answers to the above parts ?

SOLUTION :

$$(a) C_0 = \frac{\epsilon_0 A}{d_0} = \frac{8.85 \times 10^{-12} \times 0.2 \times 0.2}{0.01}$$

$$C_0 = 3.54 \times 10^{-5} \mu F.$$

$$(b) Q_0 = C_0 V_0 = (3.54 \times 10^{-5} \times 50) \mu C$$

$$Q_0 = 1.77 \times 10^{-3} \mu C$$

$$(c) U_0 = \frac{1}{2} C_0 V_0^2 = \frac{1}{2} (3.54 \times 10^{-11}) (50)^2$$

$$U_0 = 4.42 \times 10^{-8} J.$$

$$(d) E_0 = \frac{V_0}{d_0} = \frac{50}{0.01} = 5000 V/m.$$

- (e) If the battery is disconnected, the charge on the capacitor plates remains constant while the potential difference between plates can change.

$$C = \frac{\epsilon_0 A}{d} = \frac{1}{2} C_0 = 1.77 \times 10^{-5} \mu F.$$

$$Q = Q_0 = 1.77 \times 10^{-3} \mu C$$

$$V = \frac{Q}{C} = \frac{Q_0}{C_0/2} = 2V_0 = 100 \text{ volts}$$

$$U = \frac{1}{2} \frac{Q^2}{C} = \frac{1}{2} \frac{Q_0^2}{(C_0/2)}$$

$$= 2U_0 = 8.84 \times 10^{-8} J$$

$$E = \frac{V}{d} = \frac{2V_0}{2d_0} = E_0 = 5000 V/m.$$

Work has to be done against the attraction of plates when they are separated. This work gets stored in the energy of the capacitor.

Illustration - 3 In the last example, suppose that the battery is kept connected while the plates are pulled apart. What are the answers to the parts (a), (b), (c) and (d) in that case ?

SOLUTION :

If the battery is kept connected, the potential difference across the capacitor plates always remains equal to the emf of battery and hence is constant.

$$V = V_0 = 50 \text{ volts.}$$

$$C = \frac{\epsilon_0 A}{d} = \frac{\epsilon_0 A}{2d_0} = \frac{1}{2} C_0 = 1.77 \times 10^{-5} \mu F$$

$$Q = CV = \frac{1}{2} C_0 V_0 = \frac{1}{2} Q_0$$

$$= 8.85 \times 10^{-4} \mu C.$$

$$U = \frac{1}{2} CV^2 = \frac{1}{2} \left(\frac{1}{2} C_0 \right) V_0^2 = \frac{1}{2} U_0$$

$$= 2.21 \times 10^{-8} J.$$

$$E = \frac{V}{d} = \frac{V_0}{2d_0} = \frac{1}{2} E_0 = 2500 V/m$$

Note that the energy stored in the capacitor decreases. The work done to separate plates and the energy loss from capacitor get converted to heat dissipation in the connecting wire and energy used in charging the battery.

Illustration - 4 A parallel plate capacitor has plates of area 4 m^2 separated by a distance of 0.5 mm . The capacitor is connected across a cell of emf 100 volts .

- (a) Find the capacitance, charge and energy stored in the capacitor.
(b) A dielectric slab of thickness 0.5 mm is inserted inside this capacitor after it has been disconnected from the cell. Find the answers to part (a) if $k = 3$.

SOLUTION :

$$(a) C_0 = \frac{\epsilon_0 A}{d} = \frac{8.85 \times 10^{-12} \times 4}{0.5 \times 10^{-3}}$$

$$C_0 = 7.08 \times 10^{-2} \mu F.$$

$$Q_0 = C_0 V_0$$

$$= (7.08 \times 10^{-2} \times 100) \mu C = 7.08 \mu C.$$

$$U_0 = \frac{1}{2} C_0 V_0^2 = 345 \times 10^{-6} J.$$

- (b) As the cell has been disconnected, $Q = Q_0$

$$C = \frac{k \epsilon_0 A}{d} = k C_0 = 0.2124 \mu F$$

$$V = \frac{Q}{C} = \frac{Q_0}{k C_0} = \frac{V_0}{k} = \frac{100}{3} \text{ volts.}$$

$$U = \frac{1}{2} \frac{Q_0}{C} = \frac{1}{2} \frac{Q_0^2}{k C_0} = \frac{U_0}{k}$$

$$= 118 \times 10^{-6} J.$$

Electric field inside the plates

$$= E \frac{V}{d} = \frac{V_0}{kd} = \frac{E_0}{k}.$$

Note that the field becomes $1/k$ times by insertion of dielectric.

CAPACITORS IN SERIES AND PARALLEL COMBINATION

Section - 2

Series Combinations :

When capacitors are connected in series, the magnitude of charge Q on each capacitor is same. The potential difference across C_1 and C_2 is different i.e., V_1 and V_2 .

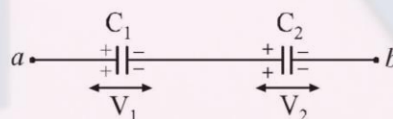
$$Q = C_1 V_1 = C_2 V_2$$

the total potential difference across combination is :

$$V = V_1 + V_2$$

$$V = \frac{Q}{C_1} + \frac{Q}{C_2}$$

$$\frac{V}{Q} = \frac{1}{C_1} + \frac{1}{C_2}$$



The ratio Q/V is called as *the equivalent capacitance* C between point a and b .

The equivalent capacitance C is given by : $\frac{1}{C} = \frac{1}{C_1} + \frac{1}{C_2}$

The potential difference across C_1 and C_2 is V_1 and V_2 respectively, given as follows :

$$V_1 = \frac{C_2}{C_1 + C_2} V; \quad V_2 = \frac{C_1}{C_1 + C_2} V$$

In case of more than two capacitors, the relation is :

$$\frac{1}{C} = \frac{1}{C_1} + \frac{1}{C_2} + \frac{1}{C_3} + \frac{1}{C_4} + \dots$$

Parallel Combinations :

When capacitors are connected in parallel, the potential difference V across each is same and the charge on C_1, C_2 is different i.e., Q_1 and Q_2 .

The total charge is Q given as :

$$Q = Q_1 + Q_2$$

$$Q = C_1 V + C_2 V$$

$$\frac{Q}{V} = C_1 + C_2$$

Equivalent capacitance between a and b is :

$$C = C_1 + C_2$$

The charges on capacitors is given as :

$$Q_1 = \frac{C_1}{C_1 + C_2} Q$$

$$Q_2 = \frac{C_2}{C_1 + C_2} Q$$

In case of more than two capacitors, $C = C_1 + C_2 + C_3 + C_4 + C_5 + \dots$

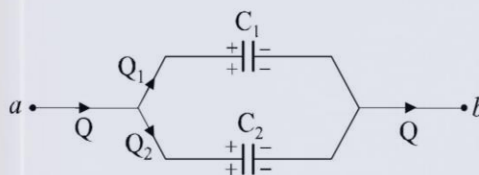
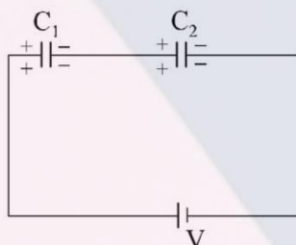


Illustration - 5 Two capacitors of capacitances $C_1 = 6 \mu F$ and $C_2 = 3 \mu F$ are connected in series across a cell of emf 18 V. Calculate :

- (a) the equivalent capacitance
(b) the potential difference across each capacitor
(c) the charge on each capacitor.

SOLUTION :



$$(a) \quad \frac{1}{C} = \frac{1}{C_1} + \frac{1}{C_2}$$

$$\Rightarrow C = \frac{C_1 C_2}{C_1 + C_2} = \frac{6 \times 3}{6 + 3} = 2 \mu F.$$

$$(b) \quad V_1 = \frac{C_2}{C_1 + C_2} V = \frac{3}{6 + 3} \times 18 = 6 \text{ volts}$$

$$V_2 = \frac{C_1}{C_1 + C_2} V = \frac{6}{6 + 3} \times 18 = 12 \text{ volts}$$

Note that the smaller capacitor C_2 has a larger potential difference across it.

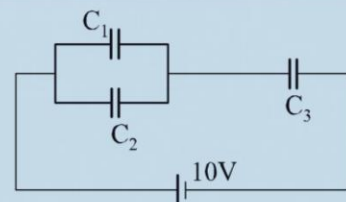
$$(c) \quad Q_1 = Q_2 = C_1 V_1 = C_2 V_2 = CV$$

charge on each capacitor = CV

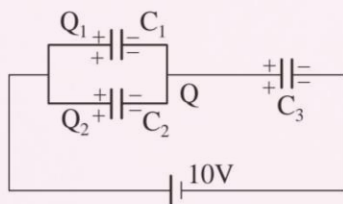
$$= 2 \mu F \times 18 \text{ volts} = 36 \mu C$$

Illustration - 6 In the circuit, the capacitors are $C_1 = 15 \mu F$, $C_2 = 10 \mu F$, $C_3 = 25 \mu F$.

- (a) Find the equivalent capacitance of the circuit,
(b) Find the charge on each capacitor, and
(c) Find the potential difference across each capacitor.



SOLUTION :



$$(a) \quad C = \frac{(C_1 + C_2) C_3}{(C_1 + C_2) + C_3} = \frac{25 \times 25}{25 + 25} \mu F = 12.5 \mu F$$

$$(b) \quad Q = \text{total charge supplied by the cell} = CV$$

$$Q = (12.5 \times 10) \mu C = 125 \mu C$$

$$\text{charge on } C_1 = Q_1 = \frac{C_1}{C_1 + C_2} Q = 75 \mu C$$

$$\text{charge on } C_2 = Q_2 = \frac{C_2}{C_1 + C_2} Q = 50 \mu C$$

$$\text{charge on } C_3 = Q = 125 \mu C$$

$$(c) \quad \text{p.d across } C_1 = V_1$$

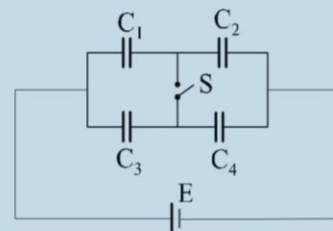
$$= \frac{Q_1}{C_1} = \frac{75}{15} \text{ volts} = 5 \text{ volts.}$$

$$\text{p.d. across } C_2 = V_2 = V_1 = 5 \text{ volts.}$$

$$\text{p.d across } C_3 = V_3 = \frac{Q_3}{C_3} = \frac{125}{25} \text{ volts} = 5 \text{ volts.}$$

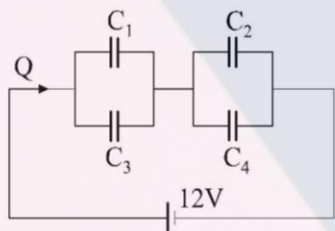
Illustration - 7 The emf of the cell in the circuit is 12 volts and the capacitors are : $C_1 = 1 \mu F$, $C_2 = 3 \mu F$, $C_3 = 2 \mu F$, $C_4 = 4 \mu F$. Calculate the charge on each capacitor and the total charge drawn from the cell when

- (a) the switch S is closed
(b) the switch S is open.



SOLUTION :

(a) Switch S is closed :



$$C = \frac{(C_1 + C_2)(C_3 + C_4)}{(C_1 + C_3) + (C_2 + C_4)}$$

$$\Rightarrow C = \frac{3 \times 7}{3 + 7} = 2.1 \mu F$$

total charge drawn from the cell is :

$$Q = CV = 2.1 \mu F \times 12 \text{ volts} = 25.2 \mu C$$

C_1, C_3 are in parallel and C_2, C_4 are in parallel.

Charge on C_1

$$Q_1 = \frac{C_1}{C_1 + C_3} Q = \frac{1}{1 + 2} \times 25.2 C$$

$$= 8.4 \mu C.$$

Charge on C_3

$$Q_3 = \frac{C_3}{C_1 + C_3} Q = \frac{2}{1 + 2} \times 25.2 C$$

$$= 16.8 \mu C$$

Charge on C_2

$$Q_2 = \frac{C_2}{C_2 + C_4} Q = \frac{3}{3 + 4} \times 25.2 C$$

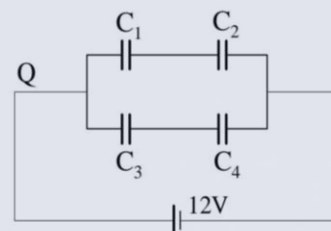
$$= 10.8 \mu C$$

Charge on C_4

$$Q_4 = \frac{C_4}{C_2 + C_4} Q = \frac{4}{3 + 4} \times 25.2 C$$

$$= 14.4 \mu C$$

(b) Switch S is open :



$$C = \frac{C_1 C_2}{C_1 + C_2} + \frac{C_3 C_4}{C_3 + C_4}$$

$$C = \frac{1 \times 3}{1 + 3} + \frac{2 \times 4}{2 + 4} = \frac{25}{12} \mu F$$

Total charge drawn from battery is :

$$Q = CV = \frac{25}{12} \times 12 = 25 C.$$

C_1 and C_2 are in series and the potential difference across combination is 12 volts.

Charge on C_1 = charge on C_2

$$= \left(\frac{C_1 C_2}{C_1 + C_2} \right) V = \frac{3}{4} \times 12 = 9 \mu C.$$

C_3 and C_4 are in series and the potential difference across combination is 12 volts.

charge on C_3 = charge on C_4

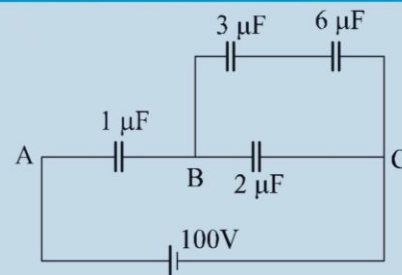
$$= \left(\frac{C_3 C_4}{C_3 + C_4} \right) V = \frac{8}{6} \times 12 = 16 \mu C.$$

Illustration - 8 In the circuit shown, the capacitances are :

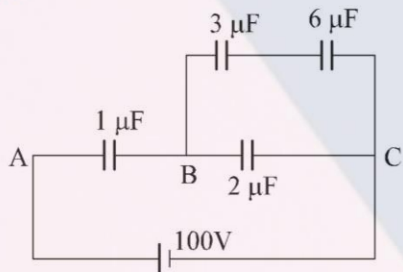
$$C_1 = 1 \mu F \quad C_2 = 2 \mu F$$

$$C_3 = 3 \mu F \quad C_4 = 6 \mu F$$

The emf of the cell is $E = 100$ volts. Find the charge and the potential difference across the capacitor C_4 .



SOLUTION :



The capacitance between points B, C is :

$$C_{BC} = \frac{3 \times 6}{3 + 6} + 2 = 4 \mu F$$

Potential difference across B, C is :

$$V_{BC} = \frac{C_1}{C_1 + C_{BC}} E = \frac{1}{1 + 4} (100) = 20 \text{ volts.}$$

Potential difference across C_4 is :

$$V_4 = \frac{3}{3 + 6} \times 20 = \frac{20}{3} \text{ volts}$$

Charge on capacitor $C_4 = C_4 V_4$

$$= 6 \times \frac{60}{9} \mu C = 40 \mu C.$$

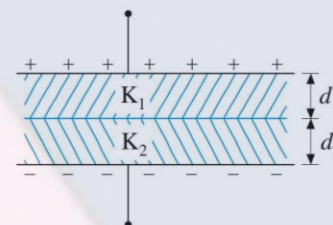
CAPACITOR WITH MORE THAN ONE DIELECTRIC SLABS

Section - 3

- (I) A parallel plate capacitor contains two dielectric slabs of thickness d_1, d_2 and dielectric constants k_1 and k_2 respectively. The area of the capacitor plates and slabs is equal to A .

Considering the capacitor as a combination of two capacitors in series, the equivalent capacitance C is given by :

$$\begin{aligned} \frac{1}{C} &= \frac{1}{C_1} + \frac{1}{C_2} \\ \frac{1}{C} &= \frac{d_1}{k_1 \epsilon_0 A} + \frac{d_2}{k_2 \epsilon_0 A} \\ \Rightarrow C &= \frac{\epsilon_0 A}{\frac{d_1}{k_1} + \frac{d_2}{k_2}} \end{aligned}$$



In general for more than one dielectric slab : $C = \frac{\epsilon_0 A}{\sum \frac{d_i}{k_i}}$

If V is the potential difference across the plates, the electric fields in the dielectrics are given as :

$$E_1 = \frac{V_1}{d_1} = \frac{Q}{C_1 d_1} = \frac{CV}{C_1 d_1} \quad \left(\text{use } C_1 = \frac{k_1 \epsilon_0 A}{d_1} \right)$$

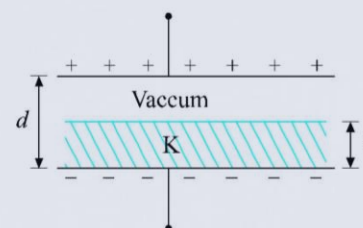
$$E_1 = \frac{1}{\frac{d_1}{k_1} + \frac{d_2}{k_2}} \left(\frac{V}{k_1} \right) \quad E_2 = \frac{1}{\frac{d_1}{k_1} + \frac{d_2}{k_2}} \left(\frac{V}{k_2} \right)$$

Note: $k_1 E_1 = k_2 E_2$ and $E_1 d_1 + E_2 d_2 = V$

- (II) If there exists a dielectric slab of thickness t inside a capacitor whose plates are separated by distance d , the equivalent capacitance is given as :

$$C = \frac{\epsilon_0 A}{\frac{t}{k} + \frac{d-t}{1}} \quad (k=1 \text{ for vacuum})$$

$$C = \frac{\epsilon_0 A}{\frac{t}{k} + d - t}$$



The equivalent capacitance is not affected by changing the distance of slab from the parallel plates.

If the slab is of metal, the equivalent capacitance is : $C = \frac{\epsilon_0 A}{d - t}$ (for a metal, $k = \infty$)

- (III) Consider a capacitor with two dielectric slabs of same thickness d placed inside it as shown. The slabs have dielectric constants k_1 and k_2 and areas A_1 and A_2 respectively. Treating the combination as two capacitors in parallel,

$$C = C_1 + C_2$$

$$C = \frac{k_1 \epsilon_0 A_1}{d} + \frac{k_2 \epsilon_0 A_2}{d} \Rightarrow C = \frac{\epsilon_0}{d} [k_1 A_1 + k_2 A_2]$$

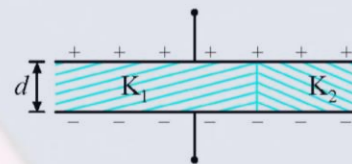


Illustration - 9 A slab is inserted inside a parallel plate capacitor whose capacitance is $20 \mu\text{F}$ without the slab. The thickness of the slab is 0.6 times the separation between the plates. The capacitor is charged to a potential difference of 200 volts and then disconnected from the source. The slab was then removed from the gap. Find the work done in removing the slab if it is made of

- (a) glass ($k = 6$) (b) metal.

SOLUTION :

Let C_0 , C be the capacitances before and after the insertion.

(a) With glass slab :

$$C_0 = \frac{\epsilon_0 A}{d} \text{ and } C = \frac{\epsilon_0 A}{d - t + \frac{t}{k}}$$

where $t = 0.6 d$

$$\Rightarrow C = \frac{C_0 d}{d - t + \frac{t}{k}} = \frac{20 \times 10^{-6}}{1 - 0.6 + \frac{0.6}{6}} = 40 \mu\text{F}$$

Q = charge on capacitor = CV

$$= 40 \times 200 \times 10^{-6} \text{ V} = 8 \times 10^3 \mu\text{C}$$

After removing the slab, the capacitance again becomes C_0 .

$$\text{Work done} = \frac{Q^2}{2C_0} - \frac{Q^2}{2C} \quad (= \text{gain in P.E.})$$

$$= \frac{8 \times 8 \times 10^{-6}}{2} \left[\frac{10^6}{20} - \frac{10^6}{40} \right] = 0.8 \text{ J.}$$

(b) with metal slab :

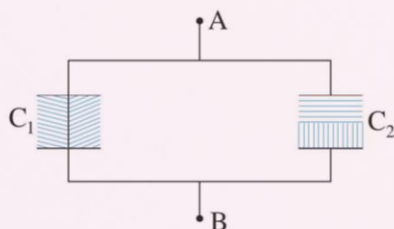
$$C = \frac{\epsilon_0 A}{d - t} = \frac{C_0 d}{d - t} = 2.5 C_0 = 50 \text{ F.}$$

$$\text{Work done} = \frac{Q^2}{2} \left[\frac{1}{C_0} - \frac{1}{C} \right]$$

$$= \frac{(50 \times 10^{-6} \times 200)^2}{2} \left[\frac{10^6}{20} - \frac{10^6}{50} \right] = 1.5 \text{ J}$$

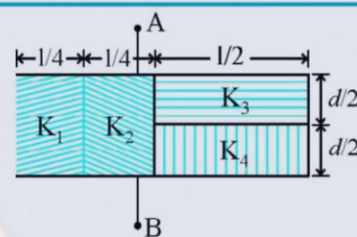
Illustration - 10 The plates of the capacitor formed by inserting four dielectric slabs (as shown) have an area equal to S . Find the equivalent capacitance between A and B if $2k_1 = 2k_2 = k_3 = k_4 = 5$.

SOLUTION :



Consider the capacitor as a parallel combination of C_1 and C_2 .

$$\text{Net capacitance} = C_1 + C_2$$



$$= \frac{\epsilon_0}{d} \left(k_1 \frac{S}{4} + k_2 \frac{S}{4} \right) + \frac{\epsilon_0 S / 2}{\frac{d/2}{k_3} + \frac{d/2}{k_4}}$$

$$= \frac{\epsilon_0 S}{4d} (k_1 + k_2) + \frac{\epsilon_0 S}{d} \left[\frac{k_3 k_4}{k_3 + k_4} \right]$$

CHARGING AND DISCHARGING OF A CAPACITOR

Section - 4

In the circuit considered so far, we have been concerned with the capacitors in the steady state i.e., the capacitors which have already been charged to their steady state voltages.

Now consider a circuit where an uncharged capacitor C is connected to a cell of emf E through a resistance R and a switch S as shown. At $t = 0$, the switch S is closed. The positive charge begins to flow from positive terminal of cell towards the upper capacitor plate and from lower plate to the negative terminal of the cell. Thus the upper plate of capacitor begins to acquire positive charge and lower plate becomes negatively charged. The voltage across capacitor begins to grow.

Let q, V_c be the charge and voltage on the capacitor at time t and i be the current.

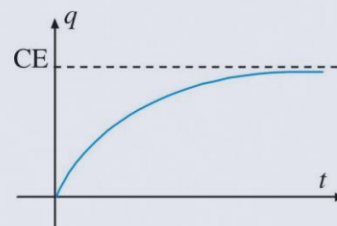
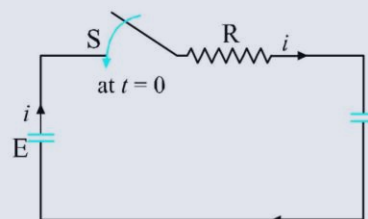
Kirchoff's Law gives :

$$E - iR - V_c = 0$$

$$E - R \frac{dq}{dt} - \frac{q}{C} = 0 \quad \left(\because i = \frac{dq}{dt} \right)$$

$$\Rightarrow \frac{dq}{CE - q} = \frac{dt}{RC} \quad \Rightarrow \int_0^q \frac{-dq}{CE - q} = \int_0^t \frac{-dt}{RC}$$

$$q(t) = CE (1 - e^{-t/RC})$$



This equation gives the expression for charge on capacitor as a function of time. The charge grows on the plate exponentially as shown on the graph. Note the following points.

1. In steady state : $t \rightarrow \infty$ and $q \rightarrow CE$
2. The voltage across capacitor also grows exponentially towards E .

$$V = \frac{q}{C} = E (1 - e^{-t/RC})$$

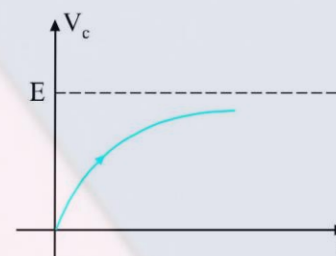
3. The time constant (τ) of the circuit is defined as the time after which the charge has grown upto $(1 - 1/e) = 0.63 \approx 63\%$ of its steady-state value.

$$\tau = RC$$

4. From conservation of energy, we can see that :

$$\begin{array}{lcl} \text{Energy supplied} & = & \text{Energy stored} + \text{Heat dissipated} \\ \text{by cell per sec} & = & \text{capacitor} + \text{in R per sec} \end{array}$$

$$Ei = iV_c + i^2 R$$



$$E = V_c + iR$$

$$E = \frac{q}{C} + R \frac{dq}{dt}$$

(Note that $i = \frac{dq}{dt}$, as q is increasing and hence $\frac{dq}{dt}$ is positive)

Discharging of a Capacitor :

If we connect a charged capacitor C across a resistance R , the capacitor begins to discharge through R . The excess positive charge on high potential plate flows through R to the negative plate and in steady state, the capacitor plates become uncharged. As the charge on plates decreases with time, dq/dt is negative and hence :

$$i = -\frac{dq}{dt}$$

From Kirchoff's Law :

$$V_c = iR$$

$$\Rightarrow \frac{q}{C} = -R \frac{dq}{dt} \Rightarrow \int_{q_0}^q \frac{dq}{q} = \int_0^t -\frac{dt}{RC}$$

where q_0 is the charge on a capacitor at $t=0$.

$$q(t) = q_0 e^{-t/RC}$$

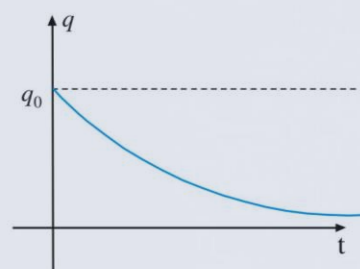
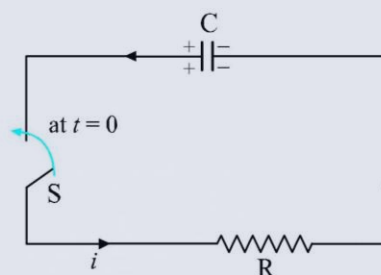


Illustration - 11 A 3×10^6 ohm resistor and a $1 \mu\text{F}$ capacitor are connected in a single-loop circuit with a seat of emf with $E = 4$ volts. At 1 sec after the connection is made, what are the rates at which :

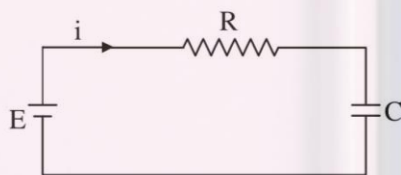
- (a) the charge of the capacitor is increasing,
- (b) energy is being stored in the capacitor,
- (c) joule heat is appearing in the resistor,
- (d) energy is being delivered by the seat of emf ?

SOLUTION :

$$E = 4 \text{ V}$$

$$R = 3 \times 10^6 \text{ ohm}$$

$$C = 1 \mu\text{F}$$



At $t = 1 \text{ s}$:

$$\begin{aligned} \frac{dq}{dt} &= \frac{4}{3 \times 10^6} e^{-1/RC} \\ &= \frac{4}{3} \times 10^{-6} e^{-1/3} = 9.6 \times 10^{-7} \text{ C/s} \end{aligned}$$

$$\begin{aligned} \text{(a)} \quad i &= \frac{dq}{dt} = \frac{d}{dt} \left[CE \left(1 - e^{-t/RC} \right) \right] \\ &= \frac{CE}{RC} e^{-t/RC} = \frac{E}{R} e^{-t/RC} \end{aligned}$$

$$\text{(b)} \quad \frac{dU}{dt} = iV_c = \frac{iq}{C}$$

$$= \frac{1}{C} \frac{E}{R} e^{-t/RC} CE \left(1 - e^{-t/RC}\right)$$

$$\frac{dU}{dt} = \frac{E^2}{R} e^{-1/3} \left(1 - e^{-1/3}\right)$$

$$= \frac{16}{3 \times 10^6} e^{-1/3} \left(1 - e^{-1/3}\right) = 1.1 \times 10^{-6} \text{ W}$$

$$(c) P = i^2 R$$

$$= (9.6 \times 10^{-7})^2 \times 3 \times 10^6$$

$$= 2.7 \times 10^{-6} \text{ W.}$$

$$(d) \text{ Energy supplied/s} = E i$$

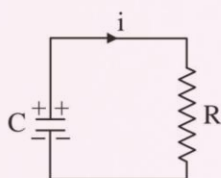
$$= 4 (9.6 \times 10^{-7}) = 3.8 \times 10^{-6} \text{ W.}$$

Illustration - 12 A $0.05 \mu\text{F}$ capacitor is charged to a potential of 200 V and is then permitted to discharge through $10 \text{ M}\Omega$ resistor. How much time is required for the charge to decrease to :

(a) $1/e$

(b) $1/e^2$ of its initial value ?

SOLUTION :



At $t = 0$, charge on capacitor is q_0 .

$$q_0 = 0.05 \times 10^{-6} \times 200 = 1 \times 10^{-5} \text{ C.}$$

$$q = q_0 e^{-t/RC}$$

$$(a) q = \frac{1}{e} q_0 \Rightarrow \frac{q_0}{e} = q_0 e^{-t/RC}$$

$$\Rightarrow e^{-1} = e^{-t/RC}$$

$$\Rightarrow t = RC = 10 \times 10^6 \times 0.05 \times 10^{-6} \text{ s} = 0.5 \text{ s.}$$

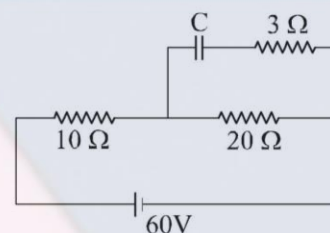
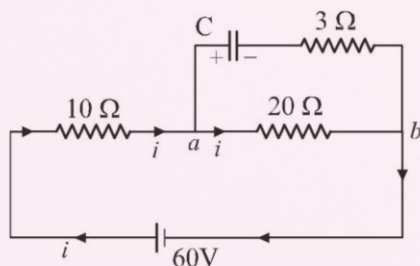
$$(b) q = \frac{1}{e^2} q_0 \Rightarrow \frac{q_0}{e^2} = q_0 e^{-t/RC}$$

$$\Rightarrow t = 2RC = 1 \text{ s.}$$

Illustration - 13 The circuit shown on the right is in steady state. Find the charge on the capacitor plates and the energy stored in the capacitor $C = 4 \mu\text{F}$.

SOLUTION :

When the circuit is in steady state, there is no current through the capacitor and hence there is no current through the 3 ohm resistor.



All the current supplied by battery goes through the 10 ohm resistor and 20 ohm resistor which appear in series.

$$\Rightarrow i = \frac{60}{10 + 20} = 2 \text{ A}$$

\Rightarrow potential difference across capacitor plates

$$= 7 \text{ p.d. across } ab = i \times 20$$

$$= 2 \times 20 = 40 \text{ volts.}$$

$$\begin{aligned} \text{Charge on capacitor} &= CV_{ab} = 4 \times 40 \mu\text{C} \\ &= 160 \mu\text{C}. \end{aligned}$$

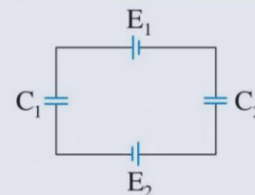
$$\text{Energy stored} = \frac{1}{2} CV_{ab}^2$$

$$= \frac{1}{2} (4 \mu\text{F}) \times (40 \text{ V})^2 = 3200 \mu\text{J}$$

SUBJECTIVE SOLVED EXAMPLES

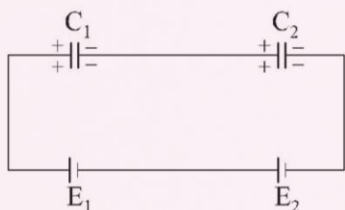
Example - 1

In given circuit, the emf of cells are $E_1 = 13 \text{ kV}$ $E_2 = 12 \text{ kV}$. The capacitances are $C_1 = 3 \mu\text{F}$ and $C_2 = 7 \mu\text{F}$. Find the voltage and charge on each capacitor.



SOLUTION :

The circuit can be re-arranged as :



The capacitors are effectively in series. Let V_1 and V_2 be the voltages across capacitors.

$$\begin{aligned} V_1 &= \frac{C_2}{C_1 + C_2} (E_1 + E_2) \\ &= \frac{7}{3 + 7} \times 25 = 17.5 \text{ kV} \end{aligned}$$

$$V_2 = \frac{C_1}{C_1 + C_2} (E_1 + E_2) = \frac{3}{3 + 7} 25 = 7.5 \text{ kV}$$

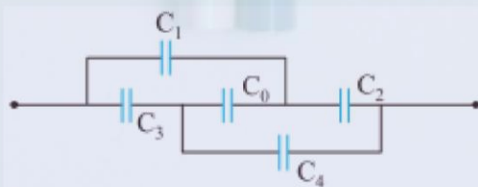
Charges are :

$$\begin{aligned} Q_1 &= C_1 V_1 \\ &= 3 \times 10^{-6} \times 17.5 \times 10^3 \text{ C} \\ &= 5.25 \times 10^{-2} \text{ C} \end{aligned}$$

$$Q_2 = C_2 V_2 = 5.25 \times 10^{-2} \text{ C}$$

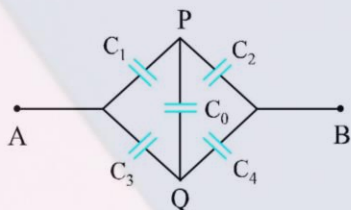
Example - 2

Find the capacitance between A and B if $C_1 = C_2 = C_3 = C_4 = 4 \mu\text{F}$ and $C_0 = 3 \mu\text{F}$.



SOLUTION :

Let us redraw the circuit as shown :



$$\frac{C_1}{C_2} = \frac{C_3}{C_4} = 1$$

The network is balanced

$$\Rightarrow V_P = V_Q$$

C_0 will not be charged and hence can be removed.

$$C_{AB} = \frac{C_1 C_2}{C_1 + C_2} + \frac{C_3 C_4}{C_3 + C_4} = 4 \mu\text{F}$$

Example - 3

Two metal spheres of radii $r_1 = 4 \text{ cm}$ and $r_2 = 10 \text{ cm}$ charged to potentials $V_1 = 100 \text{ volts}$, $V_2 = 30 \text{ volts}$ are placed at a large distance from each other. A conducting wire is then connected between the spheres. Find the :

- (a) common potential of the spheres in steady state
(c) loss of energy of the system .

- (b) final charges on the spheres

SOLUTION :

When the spheres are joined by a conducting wire, the positive charge flows from the sphere at higher potential to the sphere at lower potential. When the potential of each sphere becomes same, the flow of charge stops.

Let V = common potential in steady state.

Consider the spheres as capacitors C_1 and C_2 ,

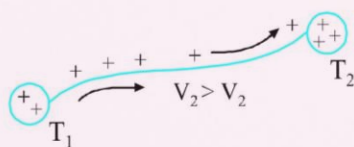
$$C_1 = 4 \pi \epsilon_0 r_1 \quad C_2 = 4 \pi \epsilon_0 r_2$$

Using charge conservation :

$$C_1 V_1 + C_2 V_2 = C_1 V + C_2 V$$

$$V = \frac{C_1 V_1 + C_2 V_2}{C_1 + C_2} = \frac{r_1 V_1 + r_2 V_2}{r_1 + r_2}$$

$$= 50 \text{ volts.}$$



Final charges on spheres are :

$$Q_1 = C_1 V = (4 \pi \epsilon_0 r_1) V = 2/9 \times 10^{-3} \mu\text{C.}$$

$$Q_2 = C_2 V = (4 \pi \epsilon_0 r_2) V = 5/9 \times 10^{-3} \mu\text{C.}$$

The loss in electrostatic potential energy is converted to heat due to the flow of charges in wire.

$$\text{loss of energy} = U_i - U_f$$

$$= \frac{1}{2} C_1 V_1^2 + \frac{1}{2} C_2 V_2^2 - \frac{1}{2} C_1 V^2 - \frac{1}{2} C_2 V^2$$

$$= \frac{1}{2} 4 \pi \epsilon_0 r_1 (100^2 - 50^2) + \frac{1}{2} 4 \pi \epsilon_0 r_2 (30^2 - 50^2)$$

$$= \frac{7}{9} \times 10^{-8} \text{ J}$$

Example - 4

A $20\ \mu\text{F}$ capacitor is charged to a potential difference of $1000\ \text{V}$. The terminals of the charged capacitor are then connected to those of an uncharged $5\ \mu\text{F}$ capacitor. Calculate :

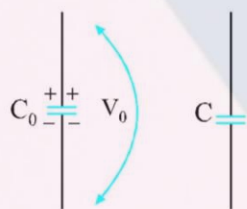
- (a) the original charge of the system (b) the final potential difference across each capacitor
(c) the final charges on each capacitor (d) the decrease in energy as a result of the process .

SOLUTION :

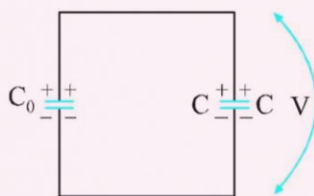
$$\text{Charge on capacitor} = Q_0 = C_0 V_0 = (20 \times 1000)\ \mu\text{C}$$

$$\Rightarrow Q_0 = 0.02\ \text{C}$$

When the capacitor are connected, the charge moves from the charged to the uncharged capacitor due to potential difference. This redistribution of charge continues till the potential difference across each capacitor becomes same.



Let V = final common potential difference across each capacitor.



Conservation of charge : $Q_i = Q_f$

$$\Rightarrow C_0 V_0 + 0 = C_0 V + C V \quad \Rightarrow \quad V = \frac{C_0 V_0}{C + C_0} = \frac{0.02\ \text{C}}{25\ \mu\text{F}} = 800\ \text{volts}$$

The charge on C_0 gets shared between C_0 and C .

Final charges on the capacitors are :

$$Q\ (\text{on } C_0) = C_0 V = (20 \times 800)\ \mu\text{C} = 16000\ \mu\text{C}$$

$$Q\ (\text{on } C) = C V = 5 \times 800\ \mu\text{C} = 4000\ \mu\text{C}$$

$$\begin{aligned} \text{loss in energy} &= \frac{1}{2} C_0 V_0^2 - \frac{1}{2} [C_0 V^2 + C V^2] = \frac{1}{2} (20 \times 10^{-6}) (1000)^2 - \frac{1}{2} [20(800)^2 + (800)^2] \times 10^{-6} \\ &= 2\ \text{J} \end{aligned}$$

This energy loss gets dissipated as heat in the connecting wires due to the currents that flow during redistribution of charges. In steady state, these currents disappear when redistribution stops.

Example - 5

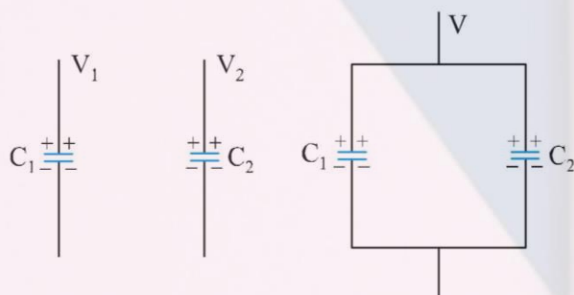
A $1 \mu\text{F}$ capacitor and a $2 \mu\text{F}$ capacitor are connected in series across a 1200 V supply line.

- (a) Find the voltage across each capacitor .
(b) The charged capacitors are disconnected from the line and from each other and reconnected with terminals of like sign together . Find the final charge on each and the voltage across each .

SOLUTION :

$$V_1 = \frac{C_2}{C_1 + C_2} V = \frac{2}{1+2} 1200 = 800 \text{ volts.}$$

$$V_2 = \frac{C_1}{C_1 + C_2} V = \frac{1}{1+2} \times 1200 = 400 \text{ volts.}$$



The total charge remains same on the plates connected together.

Let V be the final common potential difference across each capacitor.

If plates of same polarity are connected together,

Initial sum of charges on upper plates = final sum of charges on upper plates

$$(\text{charge on } C_1)_i + (\text{charge on } C_2)_i$$

$$= (\text{charge on } C_1)_f + (\text{charge on } C_2)_f$$

$$C_1 V_1 + C_2 V_2 = C_1 V + C_2 V$$

$$V = \frac{C_1 V_1 + C_2 V_2}{C_1 + C_2}$$

$$\Rightarrow V = \frac{800 + 800}{1 + 2} = \frac{1600}{3} \text{ volts.}$$

Final charges :

$$Q_1 = C_1 V = \frac{1600}{3} \mu\text{C}$$

$$Q_2 = C_2 V = \frac{3200}{3} \mu\text{C}$$

Example - 6

Two capacitors $C_1 = 1 \mu\text{F}$ and $C_2 = 4 \mu\text{F}$ are charged to a potential difference of 100 volts and 200 volts respectively. The charged capacitors are now connected to each other with terminals of opposite sign connected together. What is the

- (a) final charge on each capacitor in steady state ? (b) decrease in the energy of the system ?

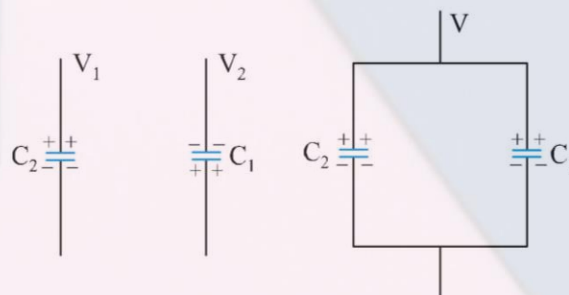
SOLUTION :

$$\text{Initial charge on } C_1 = C_1 V_1 = 100 \mu\text{C}$$

$$\text{Initial charge on } C_2 = C_2 V_2 = 800 \mu\text{C}$$

$$C_1 V_1 < C_2 V_2$$

When the terminals of opposite polarity are connected together, the magnitude of net charge finally is equal to the difference of magnitude of charges before connection.



Initial sum of charges on upper plates = final sum of charges on upper plates.

$$(\text{charge on } C_2)_i - (\text{charge on } C_1)_i \\ = (\text{charge on } C_2)_f + (\text{charge on } C_1)_f$$

Let V be the final common potential difference across each.

The charges will be redistributed and the system attains a steady state when potential difference across each capacitor becomes same.

$$\Rightarrow C_2 V_2 - C_1 V_1 = C_2 V + C_1 V$$

$$\Rightarrow V = \frac{C_1 V_2 - C_1 V_1}{C_2 + C_1} = \frac{800 - 100}{5} = 140 \text{ volts}$$

Note that because $C_1 V_1 < C_2 V_2$, the final charge polarities are same as that of C_2 before connection.

$$\text{Final charge on } C_1 = C_1 V = 140 \mu\text{C}$$

$$\text{Final charge on } C_2 = C_2 V = 560 \mu\text{C}$$

$$\text{Loss of energy} = U_i - U_f$$

Loss of energy

$$\begin{aligned} &= \frac{1}{2} C_1 V_1^2 + \frac{1}{2} C_2 V_2^2 - \frac{1}{2} C_1 V^2 - \frac{1}{2} C_2 V^2 \\ &= \frac{1}{2} 1(100)^2 + \frac{1}{2} 4(200)^2 - \frac{1}{2} (1 + 4) (140)^2 \\ &= 36000 \mu\text{J} = 0.036 \text{ J} \end{aligned}$$

Note: The energy is lost as heat in the connected wires due to the temporary currents that flow while the charge is being redistributed.

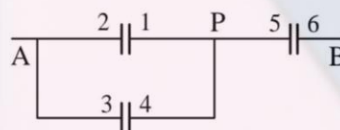
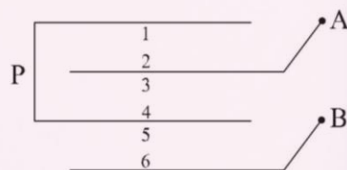
Example - 7

Four identical metal plates are located in air at equal separations d as shown. The area of each plate is A . Calculate the effective capacitance of the arrangement across A and B.



SOLUTION :

Let us call the isolated plate as P . A capacitor is formed by a pair of parallel plates facing each other. Hence we have three capacitors formed by the pairs (1, 2), (3, 4) and (5, 6). The surface 2 and 3 are at same potential as that of A . The surfaces 1, 4, 5 are at same potential (P). The arrangement can be redrawn as a network of three capacitors.



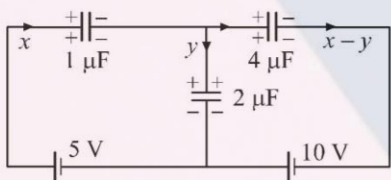
$$C_{AB} = \frac{2C \cdot C}{2C + C} = \frac{2C}{3} = \frac{2}{3} \frac{\epsilon_0 A}{d}$$

Example - 8

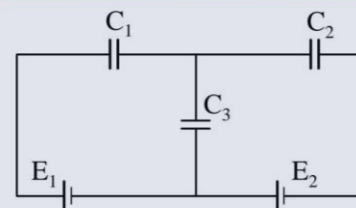
The capacitors in the given circuit have capacitances $C_1 = 1 \mu\text{F}$; $C_2 = 4 \mu\text{F}$ and $C_3 = 2 \mu\text{F}$. The emf's of the cells are $E_1 = 5\text{V}$ and $E_2 = 10\text{V}$. Calculate the charges on all the capacitors.

SOLUTION :

Let x , y be the positive charges in μC that flow along the branches as shown. If a positive charge enters a plate, it becomes positive and if it leaves a plate, it becomes negative. Applying KVL in clockwise direction in the two loops, we get :



$$\frac{-x}{1} - \frac{y}{2} + 5 = 0, \quad \frac{y}{2} - \frac{(x-y)}{4} + 10 = 0$$



Note that the pd is taken negative if we go from a positive plate to a negative plate and vice-versa. Solving the two equations we get :

$$x = 10\mu\text{C}, \quad y = -10\mu\text{C}$$

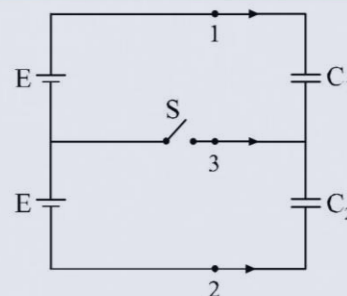
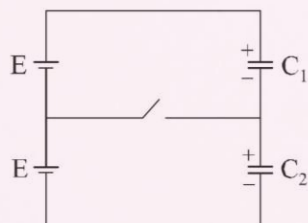
$$\Rightarrow x - y = 20 \mu\text{C}$$

Hence the capacitor C_1 has a charge of $10 \mu\text{C}$, C_2 has a charge of $20 \mu\text{C}$ and C_3 has a charge of $10 \mu\text{C}$. The polarities of C_1 and C_2 were assumed correctly while C_3 has its upper plate negative and lower plate positive.

Example - 9

In the circuit shown in figure, the emf of each battery is equal to $E = 60\text{V}$, and the capacitances are equal to $C_1 = 2.0 \mu\text{F}$ and $C_2 = 3.0 \mu\text{F}$. Find the charges which will flow after the shorting of the switch S through section 1, 2 and 3 in the directions indicated by the arrows.

SOLUTION :



V_{01} = pd across C_1 before shorting the switch

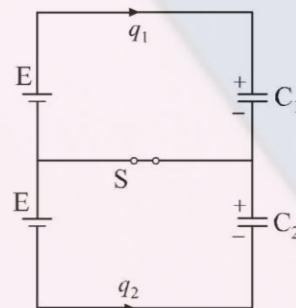
$$= 2E \frac{C_2}{C_1 + C_2} = 72\text{V}$$

V_{02} = pd across C_2 before shorting the switch

$$= 2E \frac{C_1}{C_1 + C_2} = 48\text{V}$$

$$V_1 = \text{final p.d. across } C_1 = E$$

$$V_2 = \text{final p.d. across } C_2 = E$$



The charge q_1 goes on to the upper plate of C_1 .

$$\Rightarrow q_1 = \Delta Q_1$$

$$= C_1 V_1 - C_1 V_{01} = C_1 \left(E - \frac{2EC_2}{C_1 + C_2} \right)$$

$$= \frac{C_1 E (C_1 - C_2)}{C_1 + C_2} = -24 \mu C$$

Similarly q_2 goes to the lower negative plate of C_2 .

$$q_2 = \Delta Q_2 = (-C_2 V_2) - (-C_2 V_{02})$$

$$= -C_2 E + C_2 \frac{C_2 2EC_1}{C_1 + C_2}$$

$$= \frac{C_2 E (C_1 - C_2)}{C_1 + C_2} = -36 \mu C$$

We also have $q_1 + q_2 + q_3 = 0$

$$\Rightarrow q_3 = -(q_1 + q_2) = E (C_2 - C_1) = 60 \mu C.$$

(b) Work done by cells

$$= E q_1 + E (-q_2)$$

$$= E (q_1 - q_2) = 720 \mu J$$

Charge in the potential energy of the circuit

$$= \frac{1}{2} C_1 (V_1^2 - V_{01}^2) + \frac{1}{2} C_2 (V_2^2 - V_{02}^2)$$

$$= \frac{1}{2} 2 (60^2 - 72^2) + \frac{1}{2} 3 (60^2 - 48^2)$$

$$= -360 \mu J$$

Heat dissipated = $720 \mu J - (-360) \mu J$

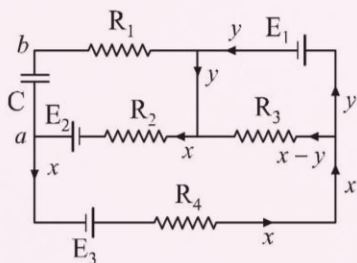
$$= 360 \mu J.$$

Example - 10

In the given circuit : $E_1 = 3E_2 = 2E_3 = 6$ volts ; $R_1 = 2R_4 = 6$ ohm, $R_3 = 2R_2 = 4$ ohm, $C = 5 \mu F$. Find the current in R_3 and the energy stored in the capacitor.

SOLUTION :

In steady state, there will be no current in R_1 because it is in series with capacitor



Loop containing E_1 and R_3 :

$$E_1 - (x - y) R_3 = 0$$

Loop containing E_2, E_3, R_4, R_3, R_2 :

$$E_3 - xR_4 - (x - y) R_3 - x R_2 + E_2 = 0$$

$$\Rightarrow 2(x - y) = 3 \quad \text{and} \quad 9x - 4y = 5$$

$$\Rightarrow x = -0.2 \text{ A}, \quad y = -1.7 \text{ A}$$

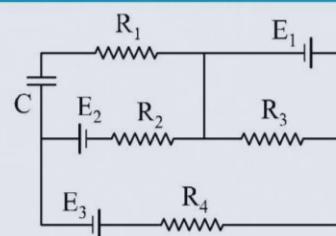
Current in $R_3 = x - y = -0.2 - (-1.7) = 1.5 \text{ A}$

P.d. across capacitor $C = V_a - V_b$

$$= -x R_2 + E_2 = 2.4 \text{ volts.}$$

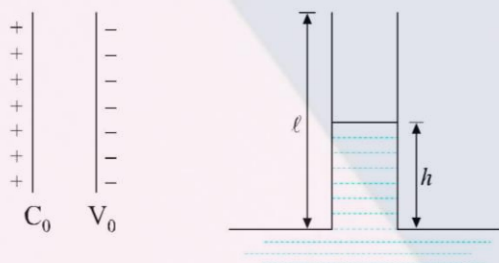
Energy stored = $\frac{1}{2} CV^2$

$$= \frac{1}{2} (5 \times 10^{-6}) (2.4)^2 = 1.44 \times 10^{-5} \text{ J.}$$



Example - 11 A parallel plate capacitor is charged by applying a potential difference across its plates. The capacitor is now disconnected from the battery and is placed vertically on the surface of liquid of density 1200 kg/m^3 . If the liquid rises to a height of 2 mm inside the capacitor plates, calculate the potential difference applied across the plates initially. The capacitor plates are of length 10 cm and area 50 cm^2 . They are separated by 1.0 mm. Dielectric constant of liquid = 14.

SOLUTION :



Let C_0 = initial capacitance and V_0 = initial pd across capacitor.

Initial charge = $C_0 V_0$ = final charge.

Let length of plates (vertical dimension) = $\ell = 10 \text{ cm}$

Breadth = $b = 5 \text{ cm}$,

Separation = $d = 0.2 \text{ cm}$.

h = height of the liquid rise, $k=14$

\Rightarrow Final capacitance

$$= C = \frac{\epsilon_0}{d} \{k_1 A_1 + k_2 A_2\}$$

$$= \frac{\epsilon_0}{d} \{b(\ell - h) + k b h\}$$

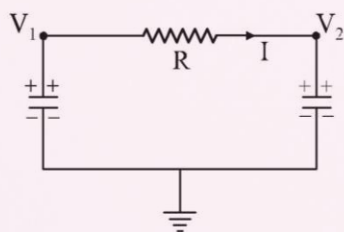
Loss in electrical energy = gain in GPE of liquid.

$$\Rightarrow \frac{(C_0 V_0)^2}{2C_0} - \frac{(C_0 V_0)^2}{2C} = m g \frac{h}{2}$$

$$\Rightarrow V_0 = 78.17 \text{ V}$$

Example - 12 Two capacitors of capacitances C_1 and C_2 are charged to potential V_{01} and V_{02} respectively. They are insulated from the source and at time $t = 0$, are connected in parallel to each other through a resistance R . Find the current I after time t in the circuit.

SOLUTION :



Let $V_1(t)$ = potential difference across C_1

$V_2(t)$ = pd across C_2 as shown

$$i(t) = \frac{V_1 - V_2}{R} \quad \dots \text{.(i)}$$

Rate of loss of charge on C_1

= rate of gain of charge on C_2 = current

$$\Rightarrow -\frac{dq_1}{dt} = \frac{dq_2}{dt} = i \quad \dots \text{.(ii)}$$

Differentiating I ,

$$\frac{di}{dt} = \frac{1}{R} \frac{d}{dt} \left(\frac{q_1}{C_1} - \frac{q_2}{C_2} \right)$$

$$\Rightarrow \frac{di}{dt} = -\frac{i}{R} \left[\frac{1}{C_1} + \frac{1}{C_2} \right]$$

$$\int_{i_0}^i \frac{di}{i} = \int_0^t \frac{-dt}{RC} \left[\text{where } C = \frac{C_1 C_2}{C_1 + C_2} \right]$$

$$i = i_0 e^{-t/RC}$$

$$\text{where } i_0 = i(0) = \frac{V_{01} - V_{02}}{R}$$

THINGS TO REMEMBER

1. Capacitor is an arrangement of two conductors carrying charges of equal magnitudes and opposite sign and separated by an insulating medium. The following points may be carefully noted.
 - (a) The positively charged conductor is at a higher potential than the negatively charged conductor. The potential difference V between the conductors is proportional to the charge magnitude Q and the ratio Q/V is known as *capacitance* C of the capacitor.

$$C = \frac{Q}{V}$$

- (b) Capacitors work as a charge-storing or energy-storing devices. A capacitor can be thought of as a device which stores energy in the form of electric field. Energy stored in a capacitor is denoted by U . If V is the potential difference across the capacitor and Q is the charge on the capacitor and C is the capacitance of capacitor, then :


$$U = \frac{1}{2} CV^2 \quad \text{or} \quad U = \frac{1}{2} \frac{Q^2}{C} \quad \text{or} \quad U = \frac{1}{2} QV$$

2. (a) Parallel Plate Capacitor :

The parallel plate capacitor consists of two metal plates placed parallel to each other and separated by a distance that is very small as compared to the dimension of the plates.

$$C = \frac{k\epsilon_0 A}{d} \quad \text{for parallel plate capacitor.}$$

Note : If there is vacuum between the plates, $k = 1$.



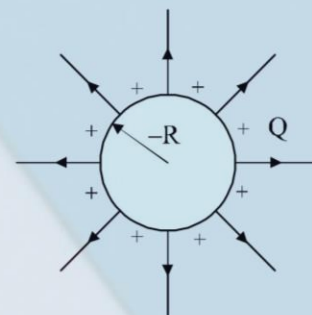
(b) Isolated Sphere as a Capacitor :

A conducting sphere of radius R carrying a charge Q can be treated as a capacitor with high-potential conductor as the sphere itself and the low-potential conductor as a sphere of infinite radius. The potential difference between these two spheres is :

$$V = \frac{Q}{4\pi\epsilon_0 R} - 0$$

$$\text{Capacitance } (C) = \frac{Q}{V}$$

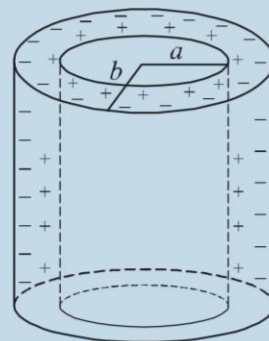
$$C = 4\pi\epsilon_0 R$$



(c) Cylindrical Capacitor :

Cylindrical capacitor consists of two co-axial cylinders of radii a and b and length ℓ . The electric field exists in the region between the cylinders. Let k be the dielectric constant of the material between the cylinders. The capacitance is given by :

$$C = \frac{2\pi k \epsilon_0 \ell}{\log \frac{b}{a}}$$



(d) Spherical Capacitor :

A spherical capacitor consists of two concentric spheres of radii a and b as shown. The inner sphere is positively charged to potential V and outer sphere is at zero potential. The inner surface of the outer sphere has an equal negative charge.

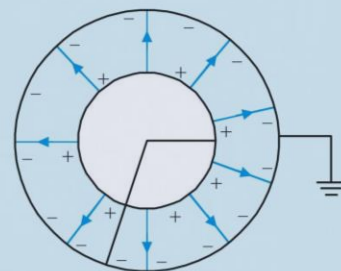
The potential difference between the spheres is :

$$V - 0 = \frac{Q}{4\pi \epsilon_0 a} - \frac{Q}{4\pi \epsilon_0 b} = \frac{Q}{4\pi \epsilon_0} \left(\frac{1}{a} - \frac{1}{b} \right)$$

$$C = \frac{4\pi \epsilon_0 ab}{b - a}$$

For a dielectric (k) between the spheres :

$$C = \frac{4\pi k \epsilon_0 ab}{b - a}$$



3. Capacitors in Series and Parallel Combination

(a) Series Combinations :

When capacitors are connected in series, the magnitude of charge Q on each capacitor is same. The potential difference across C_1 and C_2 is different i.e., V_1 and V_2 .

$$Q = C_1 V_1 = C_2 V_2$$

The equivalent capacitance C is given by :

$$\frac{1}{C} = \frac{1}{C_1} + \frac{1}{C_2} + \frac{1}{C_3} + \frac{1}{C_4} + \dots$$

The potential difference across C_1 and C_2 is V_1 and V_2 respectively, given as follows :

$$V_1 = \frac{C_2}{C_1 + C_2} V; \quad V_2 = \frac{C_1}{C_1 + C_2} V$$



(b) Parallel Combinations :

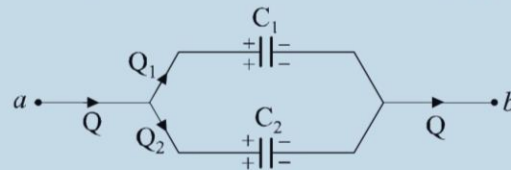
When capacitors are connected in parallel, the potential difference V across each is same and the charge on C_1, C_2 is different i.e., Q_1 and Q_2 .

Equivalent capacitance between a and b is :

$$C = C_1 + C_2 + C_4 + \dots$$

The charges on capacitors is given as :

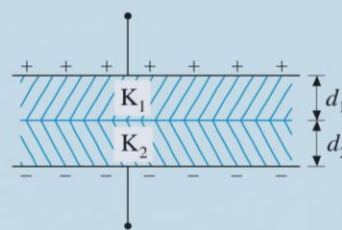
$$Q_1 = \frac{C_1}{C_1 + C_2} Q \quad \text{and} \quad Q_2 = \frac{C_2}{C_1 + C_2} Q$$



4. A parallel plate capacitor contains two dielectric slabs of thickness d_1, d_2 and dielectric constants k_1 and k_2 respectively. The area of the capacitor plates and slabs is equal to A .

Considering the capacitor as a combination of two capacitors in series, the equivalent capacitance C is given by :

$$C = \frac{\epsilon_0 A}{\frac{d_1}{k_1} + \frac{d_2}{k_2}}$$



In general for more than one dielectric slab : $C = \frac{\epsilon_0 A}{\sum \frac{d_i}{k_i}}$

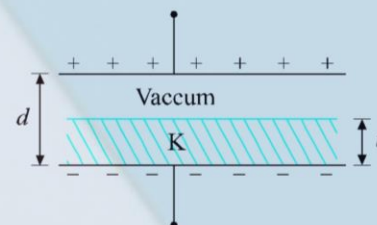
If V is the potential difference across the plates, the electric fields in the dielectrics are given as :

$$E_1 = \frac{1}{\frac{d_1}{k_1} + \frac{d_2}{k_2}} \left(\frac{V}{k_1} \right)$$

$$E_2 = \frac{1}{\frac{d_1}{k_1} + \frac{d_2}{k_2}} \left(\frac{V}{k_2} \right)$$

5. (a) If there exists a dielectric slab of thickness t inside a capacitor whose plates are separated by distance d , the equivalent capacitance is given as :

$$C = \frac{\epsilon_0 A}{\frac{t}{k} + d - t}$$

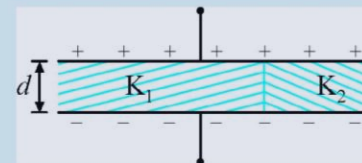


The equivalent capacitance is not affected by changing the distance of slab from the parallel plates.

If the slab is of metal, the equivalent capacitance is : $C = \frac{\epsilon_0 A}{d - t}$ (for a metal, $k = \infty$)

- (b) Consider a capacitor with two dielectric slabs of same thickness d placed inside it as shown. The slabs have dielectric constants k_1 and k_2 and areas A_1 and A_2 respectively. Treating the combination as two capacitors in parallel,

$$C = \frac{\epsilon_0}{d} [k_1 A_1 + k_2 A_2]$$



6. Consider a circuit where an uncharged capacitor C is connected to a cell of emf E through a resistance R and a switch S as shown. At $t = 0$, the switch S is closed.

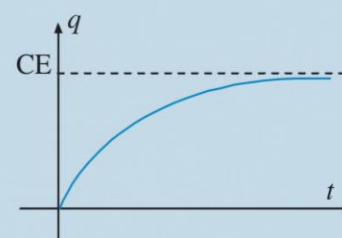
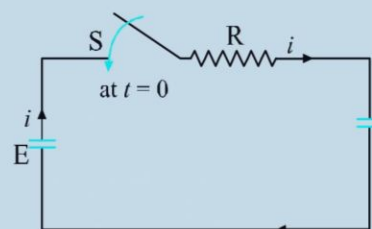
Let q , V_c be the charge and voltage on the capacitor at time t and i be the current. This equation gives the expression for charge on capacitor as a function of time. The charge grows on the plate exponentially as shown on the graph. Note the following points.

1. In steady state : $t \rightarrow \infty$ and $q \rightarrow CE$
2. The voltage across capacitor also grows exponentially towards E .

$$V = \frac{q}{C} = E (1 - e^{-t/RC})$$

3. The time constant (τ) of the circuit is defined as the time after which the charge has grown upto $(1 - 1/e) = 0.63 \equiv 63\%$ of its steady-state value.

$$\tau = RC$$



7. If we connect a charged capacitor C across a resistance R , the capacitor begins to discharge through R . The excess positive charge on high potential plate flows through R to the negative plate and in steady state, the capacitor plates become uncharged.

where q_0 is the charge on a capacitor at $t = 0$.

$$\Rightarrow \text{Where } q(t) = q_0 e^{-t/RC}$$

